

EXP.NO: 2

Name of experiment: **Half-Wave Rectifier (HWR)**

Purpose of experiment:

- Construct the half-wave rectifier circuit.
- Measure/plot the input and output waveform.
- Find the peak and average value of the output signal

Apparatus: AC power supply (Function generator) or standard transformer.

Breadboard, Semiconductor Diode, and $1K\Omega$ Resistor.

Theory:

Because of the diode's ability to conduct current in one direction and block current in the other direction, diodes are used in circuits called rectifiers that convert AC voltage into DC voltage. Rectifiers are found in all dc power supplies that operate from an AC voltage source.

In Fig.2.1, a diode is connected to an AC source that provides the input voltage V_{in} to a load resistor R_L , forming a half-wave rectifier.



Figure.2.1: Half-wave rectifier circuit

When the sinusoidal input voltage goes positive, the diode D is forward-biased and conducts current through the load resistor R_L , as shown in Fig.2.2. The current produces an output voltage across the load R_L , which has the same shape as the positive half-cycle of the input voltage.

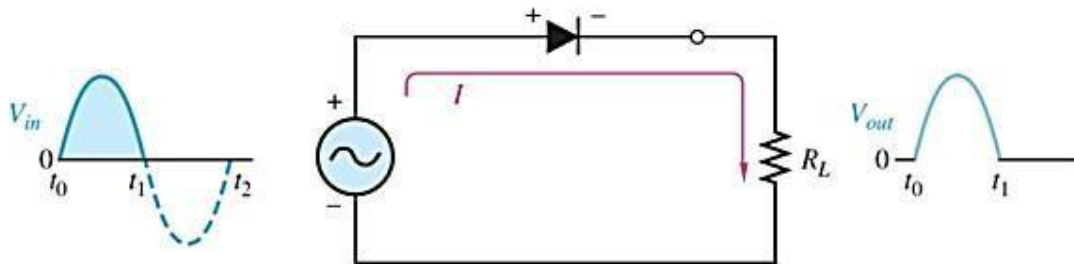


Figure.2.2. Operation during positive alternation of the input voltage

When the input voltage goes negative during the second half of its cycle, the diode is reverse-biased. There is no current, so the voltage across the load resistor R_L is zero, as shown in Fig.2.3.

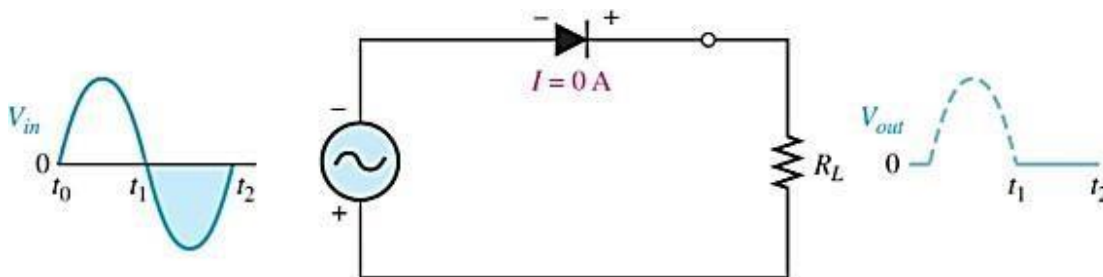


Figure 2.3. Operation during negative alternation of the input voltage

The net result is that only the positive half-cycles of the ac input voltage appear across the load. Since the output does not change polarity, it is a pulsating DC voltage, as shown in Fig.2.4.

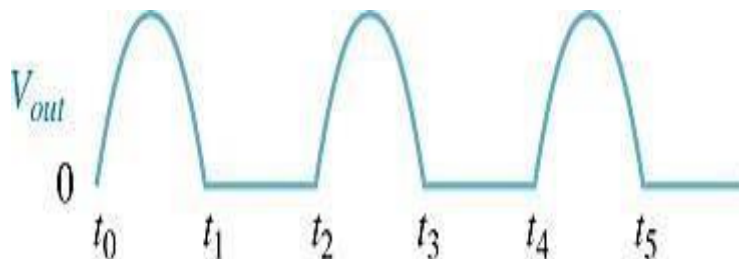


Figure 2.4. Half-wave output voltage for three input cycles

Average Value of the Output Voltage

The average value of a half-wave rectified output voltage is the value you would measure on a DC voltmeter. It can be calculated with the following equation, where $V_p(out)$ is the peak value of the half-wave rectified output voltage:

$$V_{AVG} = \frac{V_p(out)}{\pi}$$

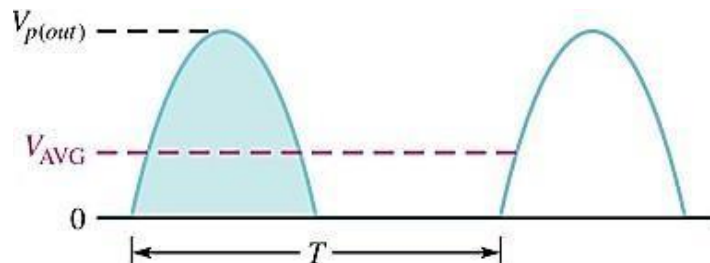


Figure 2.5: Shows the half-wave voltage with its average value indicated by the red dashed line

Procedure

1. Connect the circuit as shown in Fig.2.1 using an AC power supply (Function generator) or standard transformer, a diode, a 1kΩ resistor (RL)
2. Apply $V_{p.p} = 10$ V and a frequency of 50 Hz.
3. Display the input and output signal on the oscilloscope.
4. Tabulate your measurement result in a table as shown.

Load	V(v)	I(mA)
50 ohm		
75 ohm		
100 ohm		
150 ohm		
200 ohm		
500 ohm		

Discussion

1. Why the V_{AVG} of the input signal is close to zero?



2. On a graphic paper, draw the input and output signals, both on one chart (on top of each other). Indicating the voltages (V_p , V_{rms} , and V_{AVG}).
3. What would be the outcome if the diode is flipped? Why? Draw the output signal.



جامعة المستقبل
AL MUSTAQBAL UNIVERSITY

AL-Mustaqbal University
College of Engineering
Department of Medical Instrumentation
Techniques Engineering
Ali Ibrahim & Narges Haider
E-Mail: ali.ibrahim@uomus.edu.iq

