



Fourier Series

Periodic Function

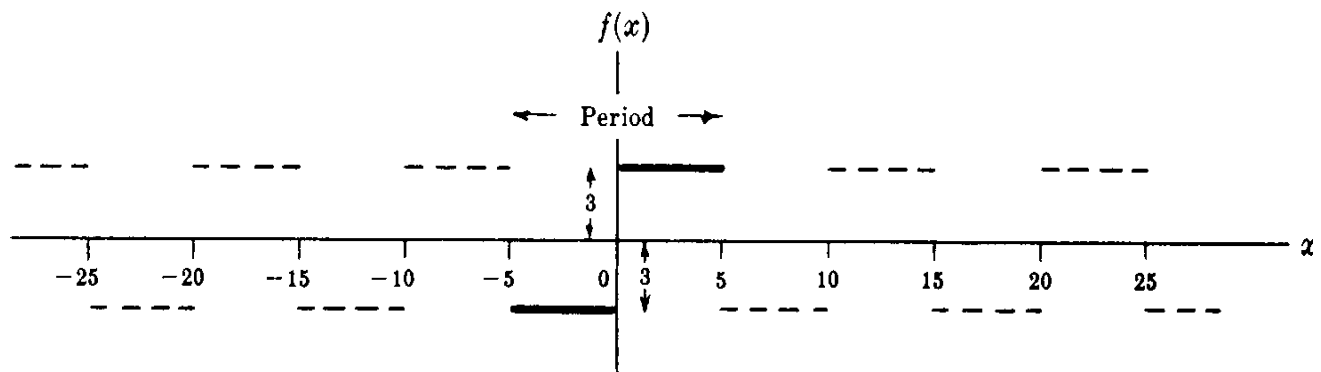
A function $f(x)$ is said to have a **period** T or to be **periodic** with period T if for all t , $f(t+T) = f(t)$, where T is a positive constant. The least value of $T > 0$ is called **the period** of $f(t)$.

Example

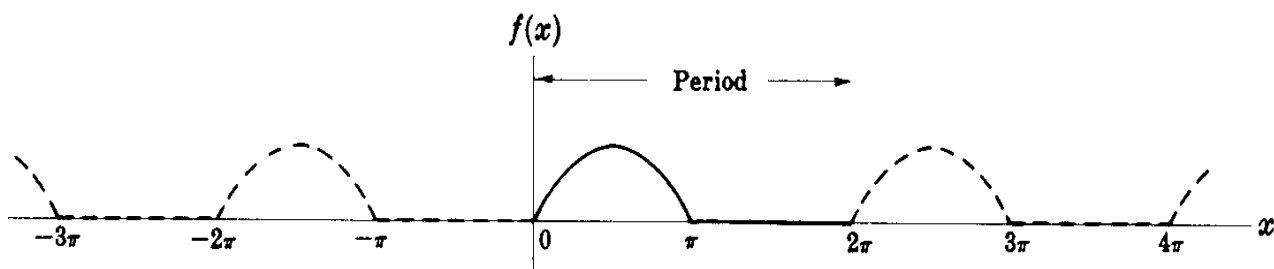
- The function $\sin(x)$ has period 2π , since $\sin(x + 2\pi) = \sin(x)$.
- The period of $\sin(nx)$ or $\cos(nx)$, where n is a positive integer, is $2\pi/n$.

Example

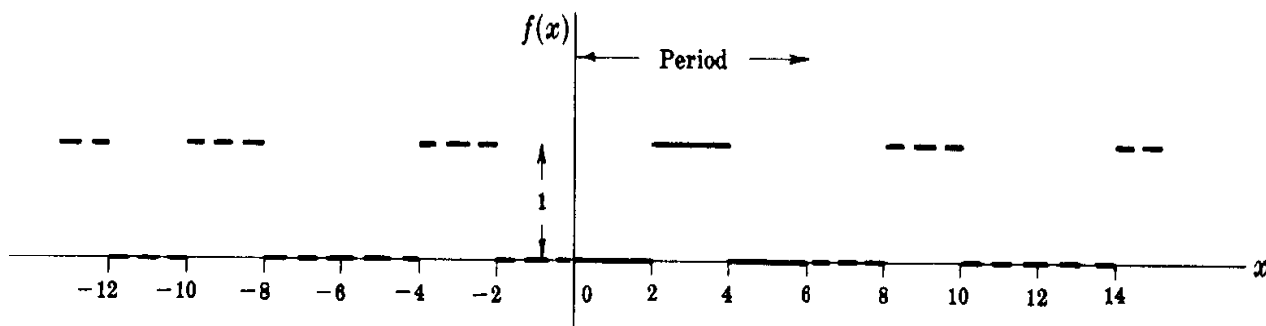
➤ $f(x) = \begin{cases} 3 & 0 < x < 5 \\ -3 & -5 < x < 0 \end{cases} \quad \text{Period} = 10$



➤ $f(x) = \begin{cases} \sin(x) & 0 < x < \pi \\ 0 & \pi < x < 2\pi \end{cases} \quad \text{Period} = 2\pi$



$$\triangleright f(x) = \begin{cases} 0 & 0 < x < 2 \\ 1 & 2 < x < 4 \\ 0 & 4 < x < 6 \end{cases} \quad \text{Period} = 6$$



Exercises

Find the smallest positive period of the following functions

1) $\cos(x)$ *Ans.* 2π

2) $\sin(x)$ *Ans.* 2π

3) $\cos(2x)$ *Ans.* π

4) $\sin(2x)$ *Ans.* π

- 5) $\cos(\pi x)$ *Ans.* 2
6) $\sin(\pi x)$ *Ans.* 2
7) $\cos(2\pi x)$ *Ans.* 1
8) $\sin(2\pi x)$ *Ans.* 1
9) $\cos(nx)$ *Ans.* $2\pi / n$
10) $\sin(nx)$ *Ans.* $2\pi / n$
11) $\cos\left(\frac{2\pi x}{k}\right)$ *Ans.* k
12) $\sin\left(\frac{2\pi x}{k}\right)$ *Ans.* k
13) $\cos\left(\frac{2\pi nx}{k}\right)$ *Ans.* $\frac{k}{n}$
14) $\sin\left(\frac{2\pi nx}{k}\right)$ *Ans.* $\frac{k}{n}$

Fourier Series

Let $f(t)$ is a periodic function with a period of T . The *Fourier Series* or *Fourier Expansion* corresponding to $f(t)$ is given by

$$f(t) = d_0 + \sum_{n=1}^{\infty} a_n \cos(n\omega_0 t) + \sum_{n=1}^{\infty} b_n \sin(n\omega_0 t)$$

where the Fourier coefficients a_n and b_n are

$$a_n = \frac{2}{T} \int_{-T/2}^{T/2} f(t) \cos(n\omega_0 t) dt \quad n = 0, 1, 2, \dots$$

$$b_n = \frac{2}{T} \int_{-T/2}^{T/2} f(t) \sin(n\omega_0 t) dt \quad n = 0, 1, 2, \dots$$

with $\omega_0 = \frac{2\pi}{T}$

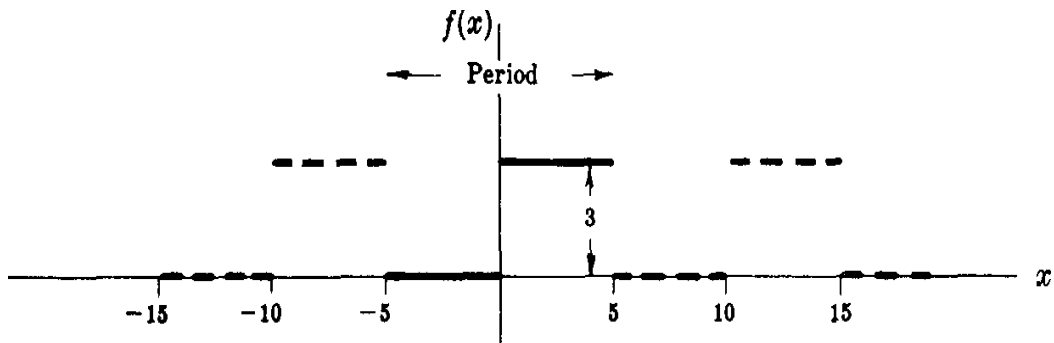
and $d_0 = \frac{1}{T} \int_{-T/2}^{T/2} f(t) dt$

Example

Find the Fourier series corresponding to the function

$$f(x) = \begin{cases} 0 & -5 < x < 0 \\ 3 & 0 < x < 5 \end{cases} \quad \text{Period} = 10$$

Solution



$$T = 10, \quad \omega_0 = \frac{2\pi}{T} = \frac{2\pi}{10} = \frac{\pi}{5}$$

$$d_0 = \frac{1}{T} \int_{-T/2}^{T/2} f(x) dx = \frac{1}{10} \int_{-5}^5 f(x) dx = \frac{1}{10} \int_0^5 3 dx = \frac{3}{10} x \Big|_0^5 = \frac{3}{10} (5 - 0) = \frac{3}{2}$$

$$a_n = \frac{2}{T} \int_{-T/2}^{T/2} f(x) \cos(n\omega_0 x) dx = \frac{2}{10} \int_0^5 3 \cos\left(\frac{\pi}{5} nx\right) dx = \frac{3}{5} \times \frac{5}{n\pi} \sin\left(\frac{\pi}{5} nx\right) \Big|_0^5$$

$$= \frac{3}{n\pi} \left[\sin\left(\frac{\pi}{5} \times 5n\right) - \sin(0) \right] = \frac{3}{n\pi} \sin(n\pi) = 0$$

$$b_n = \frac{2}{T} \int_{-T/2}^{T/2} f(x) \sin(n\omega_0 x) dx = \frac{2}{10} \int_{-5}^5 f(x) \sin\left(\frac{\pi}{5} nx\right) dx = \frac{1}{5} \int_0^5 3 \sin\left(\frac{\pi}{5} nx\right) dx$$

$$= \frac{3}{5} \times \frac{5}{n\pi} \cos\left(\frac{\pi}{5} nx\right) \Big|_0^5 = \frac{3}{n\pi} \left[1 - \cos\left(\frac{\pi}{5} \times 5n\right) \right] = \frac{3}{n\pi} [1 - \cos(n\pi)]$$

$$\cos(n\pi) = \begin{cases} +1 & n \text{ even} \\ -1 & n \text{ odd} \end{cases} \Rightarrow b_n = \begin{cases} 0 & n \text{ even} \\ 6/n\pi & n \text{ odd} \end{cases}$$

The corresponding Fourier series is

$$f(x) = d_0 + \sum_{n=1}^{\infty} a_n \cos(n\omega_0 x) + \sum_{n=1}^{\infty} b_n \sin(n\omega_0 x)$$

$$f(x) = \frac{3}{2} + \frac{6}{\pi} \left(\sin\left(\frac{\pi}{5} x\right) + \frac{1}{3} \sin\left(\frac{3\pi}{5} x\right) + \frac{1}{5} \sin(\pi x) + \dots \right)$$

Notes:

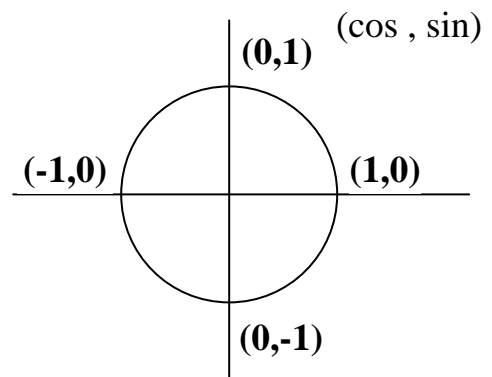
➤ $\sin(n\pi) = 0, \quad \sin(2n\pi) = 0$

$$\text{➤ } \sin\left(\frac{n\pi}{2}\right) = \begin{cases} 0 & n \text{ even} \\ +1 & n = 1, 5, 9, \dots \\ -1 & n = 3, 7, 11, \dots \end{cases}$$

$$\text{➤ } \cos(n\pi) = \begin{cases} +1 & n \text{ even} \\ -1 & n \text{ odd} \end{cases}$$

➤ $\cos(2n\pi) = 1$

$$\text{➤ } \cos\left(\frac{n\pi}{2}\right) = \begin{cases} 0 & n \text{ odd} \\ +1 & n = 4, 8, 12, \dots \\ -1 & n = 2, 6, 10, \dots \end{cases}$$



$$\triangleright \int_{-T/2}^{T/2} \sin(k\omega_0 t) dt = \int_{-T/2}^{T/2} \cos(k\omega_0 t) dt = 0 \quad \text{if } k = 1, 2, 3, \dots$$

Proof

$$\begin{aligned} \int_{-T/2}^{T/2} \sin(k\omega_0 t) dt &= -\frac{1}{k\omega_0} \cos(k\omega_0 t) \Big|_{-T/2}^{T/2} \\ &= -\frac{1}{k\omega_0} \left(\cos\left(k \frac{2\pi}{T} \times \frac{T}{2}\right) - \cos\left(k \frac{2\pi}{T} \times \frac{-T}{2}\right) \right) \\ &= -\frac{1}{k\omega_0} (\cos(k\pi) - \cos(-k\pi)) = 0 \end{aligned}$$

$$\begin{aligned} \int_{-T/2}^{T/2} \cos(k\omega_0 t) dt &= \frac{1}{k\omega_0} \sin(k\omega_0 t) \Big|_{-T/2}^{T/2} \\ &= \frac{1}{k\omega_0} \left(\sin\left(k \frac{2\pi}{T} \times \frac{T}{2}\right) - \sin\left(k \frac{2\pi}{T} \times \frac{-T}{2}\right) \right) \\ &= \frac{1}{k\omega_0} (\sin(k\pi) - \sin(-k\pi)) = 0 \end{aligned}$$

$$\triangleright \int_{-T/2}^{T/2} \cos(m\omega_0 t) \cos(n\omega_0 t) dt = \int_{-T/2}^{T/2} \sin(m\omega_0 t) \sin(n\omega_0 t) dt = \begin{cases} 0 & m \neq n \\ T/2 & m = n \end{cases}$$

where m and n assume any of the values $1, 2, 3, \dots$

Proof

Using the trigonometry $\cos(A)\cos(B) = \frac{1}{2}\cos(A-B) + \frac{1}{2}\cos(A+B)$ then

If $m \neq n$

$$\int_{-T/2}^{T/2} \cos(m\omega_0 t) \cos(n\omega_0 t) dt = \frac{1}{2} \int_{-T/2}^{T/2} \cos((m-n)\omega_0 t) + \frac{1}{2} \int_{-T/2}^{T/2} \cos((m+n)\omega_0 t) = 0$$

Also, by using $\sin(A)\sin(B) = \frac{1}{2}\cos(A-B) - \frac{1}{2}\cos(A+B)$ then

If $m \neq n$

$$\int_{-T/2}^{T/2} \sin(m\omega_0 t) \sin(n\omega_0 t) dt = \frac{1}{2} \int_{-T/2}^{T/2} \cos((m-n)\omega_0 t) - \frac{1}{2} \int_{-T/2}^{T/2} \cos((m+n)\omega_0 t) = 0$$

If $m = n$, we have

$$\begin{aligned} \int_{-T/2}^{T/2} \cos(m\omega_0 t) \cos(n\omega_0 t) dt &= \frac{1}{2} \int_{-T/2}^{T/2} (1 + \cos(2n\omega_0 t)) dt \\ &= \frac{1}{2} \int_{-T/2}^{T/2} dt + \frac{1}{2} \int_{-T/2}^{T/2} \cos(2n\omega_0 t) dt = \frac{1}{2} \left(\frac{T}{2} + \frac{T}{2} \right) = \frac{T}{2} \end{aligned}$$

$$\begin{aligned} \int_{-T/2}^{T/2} \sin(m\omega_0 t) \sin(n\omega_0 t) dt &= \frac{1}{2} \int_{-T/2}^{T/2} (1 - \cos(2n\omega_0 t)) dt \\ &= \frac{1}{2} \int_{-T/2}^{T/2} dt - \frac{1}{2} \int_{-T/2}^{T/2} \cos(2n\omega_0 t) dt = \frac{1}{2} \left(\frac{T}{2} + \frac{T}{2} \right) = \frac{T}{2} \end{aligned}$$

Note that if $m = n = 0$ then $\int_{-T/2}^{T/2} \cos(m\omega_0 t) \cos(n\omega_0 t) dt = T$

and $\int_{-T/2}^{T/2} \sin(m\omega_0 t) \sin(n\omega_0 t) dt = 0$

$$\triangleright \int_{-T/2}^{T/2} \sin(m\omega_0 t) \cos(n\omega_0 t) dt = 0$$

Proof

Using the trigonometry $\sin(A)\cos(B) = \frac{1}{2}\sin(A-B) + \frac{1}{2}\sin(A+B)$

If $m \neq n$

$$\int_{-T/2}^{T/2} \sin(m\omega_0 t) \cos(n\omega_0 t) dt = \frac{1}{2} \int_{-T/2}^{T/2} \sin((m-n)\omega_0 t) dt + \frac{1}{2} \int_{-T/2}^{T/2} \sin((m+n)\omega_0 t) dt = 0$$

If $m = n$, we have

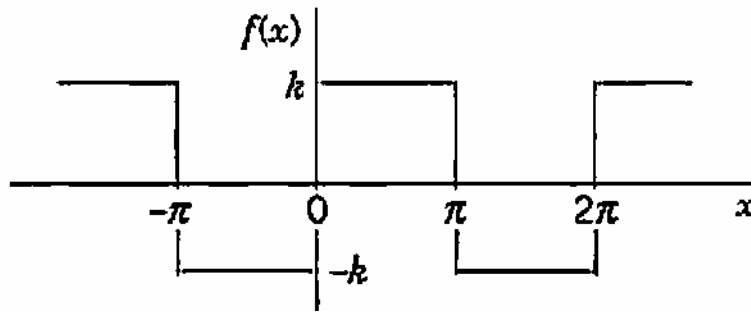
$$\int_{-T/2}^{T/2} \sin(m\omega_0 t) \cos(n\omega_0 t) dt = \frac{1}{2} \int_{-T/2}^{T/2} \sin(2n\omega_0 t) dt = 0$$

Example

Find the Fourier series corresponding to the function

$$f(x) = \begin{cases} -k & -\pi < x < 0 \\ k & 0 < x < \pi \end{cases} \quad \text{Period} = 2\pi$$

Solution



$$T = 2\pi, \omega_0 = \frac{2\pi}{T} = \frac{2\pi}{2\pi} = 1$$

$$d_0 = \frac{1}{T} \int_{-T/2}^{T/2} f(x) dx = \frac{1}{2\pi} \int_{-\pi}^{\pi} f(x) dx = \frac{1}{2\pi} \left[\int_{-\pi}^0 (-k) dx + \int_0^{\pi} k dx \right] = 0$$

$$\begin{aligned} a_n &= \frac{2}{T} \int_{-T/2}^{T/2} f(x) \cos(n\omega_0 x) dx \\ &= \frac{2}{2\pi} \left[\int_{-\pi}^0 (-k) \cos(nx) dx + \int_0^{\pi} k \cos(nx) dx \right] \end{aligned}$$

$$= \frac{1}{\pi} \left[-\frac{k}{n} \sin(nx) \Big|_{-\pi}^0 + \frac{k}{n} \sin(nx) \Big|_0^{\pi} \right] = 0$$

$$\begin{aligned} b_n &= \frac{2}{T} \int_{-T/2}^{T/2} f(x) \sin(n\omega_0 x) dx \\ &= \frac{2}{2\pi} \left[\int_{-\pi}^0 (-k) \sin(nx) dx + \int_0^{\pi} k \sin(nx) dx \right] \\ &= \frac{1}{\pi} \left[\frac{k}{n} \cos(nx) \Big|_{-\pi}^0 - \frac{k}{n} \cos(nx) \Big|_0^{\pi} \right] \\ &= \frac{k}{n\pi} [1 - \cos(n\pi) - \cos(n\pi) + 1] \\ &= \frac{2k}{n\pi} [1 - \cos(n\pi)] \end{aligned}$$

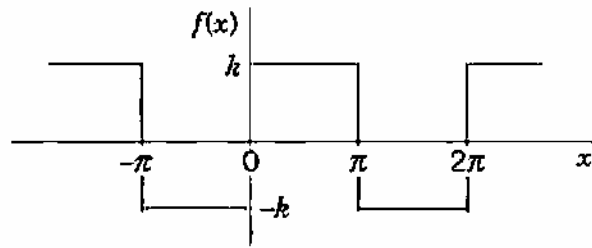
$$\cos(n\pi) = \begin{cases} +1 & n \text{ even} \\ -1 & n \text{ odd} \end{cases} \Rightarrow b_n = \begin{cases} 0 & n \text{ even} \\ \frac{4k}{n\pi} & n \text{ odd} \end{cases}$$

The corresponding Fourier series is

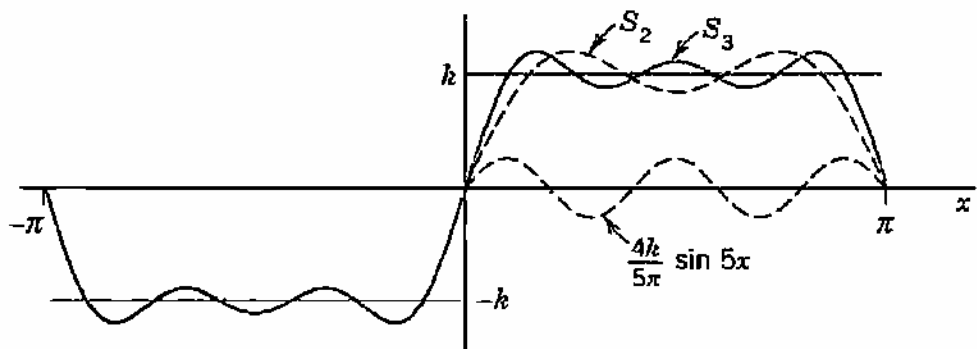
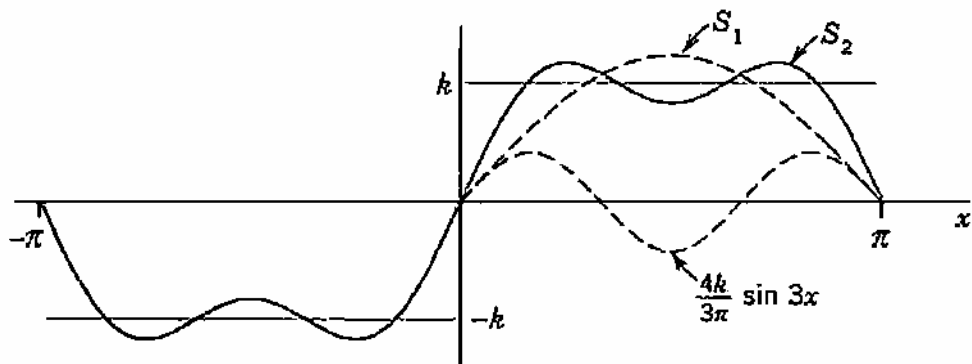
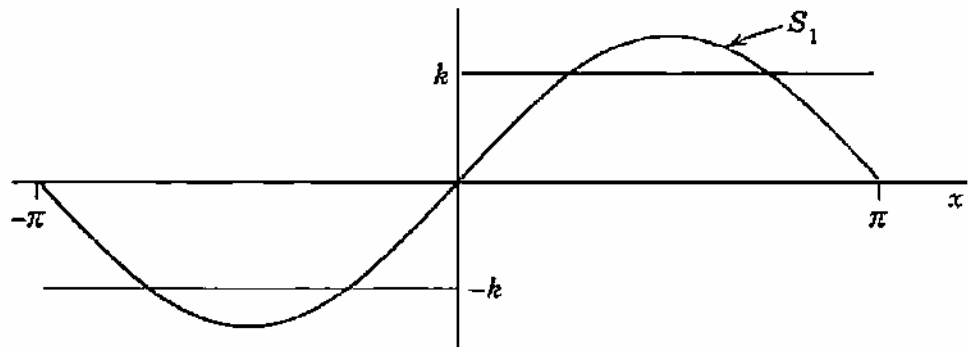
$$\begin{aligned} f(x) &= d_0 + \sum_{n=1}^{\infty} a_n \cos(n\omega_0 x) + \sum_{n=1}^{\infty} b_n \sin(n\omega_0 x) \\ f(x) &= \frac{4k}{\pi} \left(\sin(x) + \frac{1}{3} \sin(3x) + \frac{1}{5} \sin(5x) + \dots \right) \end{aligned}$$

The partial sums are

$$S_1 = \frac{4k}{\pi} \sin(x), \quad S_2 = \frac{4k}{\pi} \left[\sin(x) + \frac{1}{3} \sin(3x) \right]$$



(a) The given function $f(x)$ (Periodic rectangular wave)



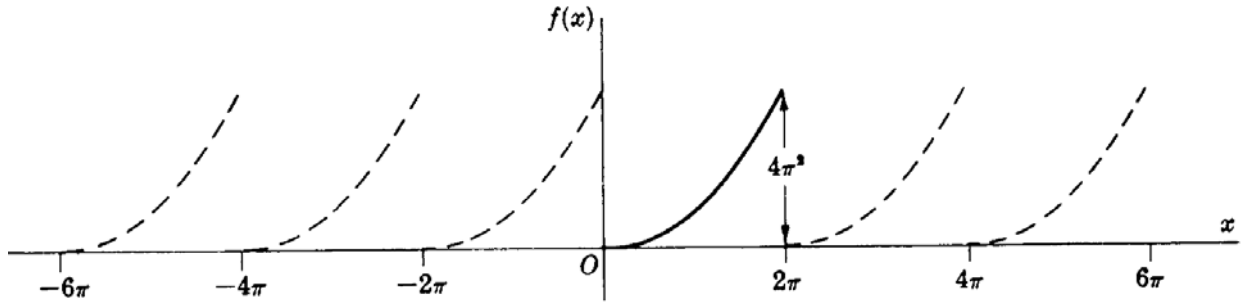
(b) The first three partial sums of the corresponding Fourier series

Example

Find the Fourier series of the periodic function

$$f(x) = x^2 \quad 0 < x < 2\pi$$

Solution



$$T = 2\pi \Rightarrow \omega_0 = \frac{2\pi}{T} = \frac{2\pi}{2\pi} = 1$$

$$d_0 = \frac{1}{T} \int_0^T f(x) dx = \frac{1}{2\pi} \int_0^{2\pi} x^2 dx = \frac{1}{2\pi} \left. \frac{x^3}{3} \right|_0^{2\pi} = \frac{4\pi^2}{3}$$

$$a_n = \frac{2}{T} \int_0^T f(x) \cos(n\omega_0 x) dx = \frac{2}{2\pi} \int_0^{2\pi} x^2 \cos(nx) dx$$

$$= \frac{1}{\pi} \left\{ (x^2) \left(\frac{\sin(nx)}{n} \right) - (2x) \left(\frac{-\cos(nx)}{n^2} \right) + 2 \left(\frac{-\sin(nx)}{n^3} \right) \right\} \Bigg|_0^{2\pi} = \frac{4}{n^2}$$

$$b_n = \frac{2}{T} \int_0^T f(x) \sin(n\omega_0 x) dx = \frac{2}{2\pi} \int_0^{2\pi} x^2 \sin(nx) dx$$

$$= \frac{1}{\pi} \left\{ (x^2) \left(\frac{-\cos(nx)}{n} \right) - (2x) \left(\frac{-\sin(nx)}{n^2} \right) + 2 \left(\frac{\cos(nx)}{n^3} \right) \right\} \Bigg|_0^{2\pi} = \frac{-4\pi}{n}$$

$$\text{So, } f(x) = \frac{4\pi^2}{3} + \sum_{n=1}^{\infty} \frac{4}{n^2} \cos(nx) - \sum_{n=1}^{\infty} \frac{4\pi}{n} \sin(nx)$$

$$f(x) = \frac{4\pi^2}{3} + 4 \left(\cos(x) + \frac{1}{4} \cos(2x) + \dots \right) - 4\pi \left(\sin(x) + \frac{1}{2} \sin(2x) + \dots \right)$$

Exercises

Evaluate the following integrals where $n = 0, 1, 2, \dots$

1) $\int_0^{\pi} \sin(nx) dx$

Ans. $\begin{cases} 0 & n \text{ even} \\ 2/n & n \text{ odd} \end{cases}$

2) $\int_{-\pi}^{\pi} x \sin(nx) dx$

Ans. $\begin{cases} 0 & n = 0 \\ 2\pi/n & n = 1, 3, \dots \\ -2\pi/n & n = 2, 4, \dots \end{cases}$

3) $\int_{-\pi/2}^{\pi/2} x \cos(nx) dx$

Ans. 0

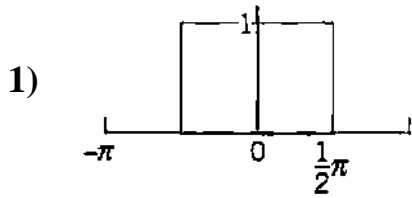
4) $\int_{-\pi}^0 e^x \sin(nx) dx$

Ans. $\frac{n((-1)^n e^{-\pi} - 1)}{(1+n^2)}$

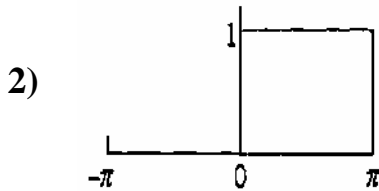
5) $\int_{-\pi}^{\pi} x^2 \cos(nx) dx$

Ans. $\begin{cases} 2\pi^3/3 & n = 0 \\ (-1)^n 4\pi/n^2 & n = 1, 2, \dots \end{cases}$

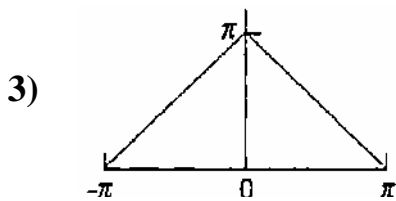
Find the Fourier Series for the following periodic functions



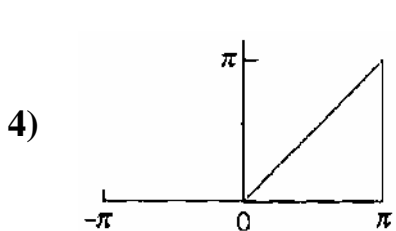
Ans. $\frac{1}{2} + \frac{2}{\pi} \left(\cos(x) - \frac{1}{3} \cos(3x) + \frac{1}{5} \cos(5x) - \dots \right)$



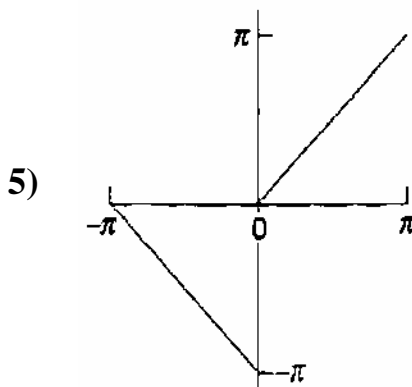
Ans. $\frac{1}{2} + \frac{2}{\pi} \left(\sin(x) + \frac{1}{3} \sin(3x) + \frac{1}{5} \sin(5x) + \dots \right)$



Ans. $\frac{\pi}{2} + \frac{4}{\pi} \left(\cos(x) + \frac{1}{9} \cos(3x) + \frac{1}{25} \cos(5x) + \dots \right)$



Ans. $\frac{\pi}{4} - \frac{2}{\pi} \left(\cos(x) + \frac{1}{9} \cos(3x) + \frac{1}{25} \cos(5x) + \dots \right)$
 $+ \sin(x) - \frac{1}{2} \sin(2x) + \frac{1}{3} \sin(3x) - \dots$



Ans. $-\frac{4}{\pi} \left(\cos(x) + \frac{1}{9} \cos(3x) + \frac{1}{25} \cos(5x) + \dots \right)$
 $+ 2 \left(\sin(x) + \frac{1}{3} \sin(3x) + \frac{1}{5} \sin(5x) + \dots \right)$

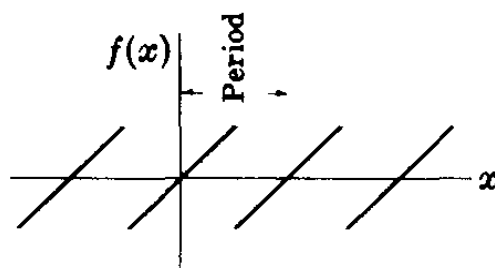
Find the Fourier Series for the following periodic functions

- 1) $f(x) = \begin{cases} 1 & -\pi/2 < x < \pi/2 \\ -1 & \pi/2 < x < 3\pi/2 \end{cases}$ **Ans.** $\frac{4}{\pi} \left(\cos(x) - \frac{1}{3} \cos(3x) + \frac{1}{5} \cos(5x) - \dots \right)$
- 2) $f(x) = x \quad -\pi < x < \pi$ **Ans.** $2 \left(\sin(x) - \frac{1}{2} \sin(2x) + \frac{1}{3} \sin(3x) - \dots \right)$
- 3) $f(x) = x^2 \quad -\pi < x < \pi$ **Ans.** $\frac{\pi^2}{3} - 4 \left(\cos(x) - \frac{1}{4} \cos(2x) + \frac{1}{9} \cos(3x) - \dots \right)$
- 4) $f(x) = \begin{cases} \pi+x & -\pi < x < 0 \\ \pi-x & 0 < x < \pi \end{cases}$ **Ans.** $\frac{\pi}{2} + \frac{4}{\pi} \left(\cos(x) + \frac{1}{9} \cos(3x) + \frac{1}{25} \cos(5x) + \dots \right)$
- 5) $f(x) = \begin{cases} x & -\pi/2 < x < \pi/2 \\ \pi-x & \pi/2 < x < 3\pi/2 \end{cases}$ **Ans.** $\frac{4}{\pi} \left(\sin(x) - \frac{1}{9} \sin(3x) + \frac{1}{25} \sin(5x) - \dots \right)$
- 6) $f(x) = \begin{cases} x^2 & -\pi/2 < x < \pi/2 \\ \pi^2/4 & \pi/2 < x < 3\pi/2 \end{cases}$ **Ans.** $\frac{\pi^2}{6} - \frac{4}{\pi} \cos(x) - \frac{1}{2} \cos(2x) + \frac{4}{27\pi} \cos(3x) + \frac{1}{8} \cos(4x) - \dots$
- 7) $f(x) = \begin{cases} -1 & -1 < x < 0 \\ 1 & 0 < x < 1 \end{cases}$ **Ans.** $\frac{4}{\pi} \left(\sin(\pi x) + \frac{1}{3} \sin(3\pi x) + \frac{1}{5} \sin(5\pi x) + \dots \right)$
- 8) $f(x) = \begin{cases} -1 & -2 < x < 0 \\ 1 & 0 < x < 2 \end{cases}$ **Ans.** $\frac{4}{\pi} \left(\sin\left(\frac{\pi x}{2}\right) + \frac{1}{3} \sin\left(\frac{3\pi x}{2}\right) + \frac{1}{5} \sin\left(\frac{5\pi x}{2}\right) + \dots \right)$
- 9) $f(x) = \begin{cases} 0 & -2 < x < 0 \\ 1 & 0 < x < 2 \end{cases}$ **Ans.** $\frac{1}{2} + \frac{2}{\pi} \left(\sin\left(\frac{\pi x}{2}\right) + \frac{1}{3} \sin\left(\frac{3\pi x}{2}\right) + \frac{1}{5} \sin\left(\frac{5\pi x}{2}\right) + \dots \right)$
- 10) $f(x) = x^2 \quad -1 < x < 1$ **Ans.** $\frac{1}{3} - \frac{4}{\pi^2} \left(\cos(\pi x) - \frac{1}{4} \cos(2\pi x) + \frac{1}{9} \cos(3\pi x) - \dots \right)$

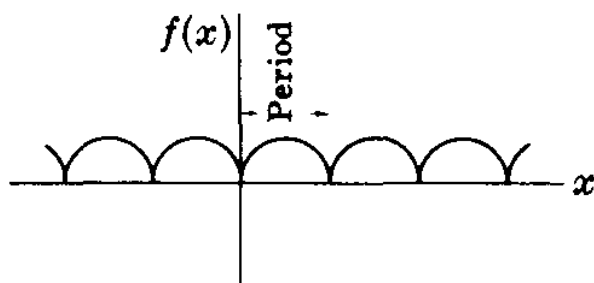
- 11) $f(x) = \begin{cases} 0 & -1 < x < 0 \\ x & 0 < x < 1 \end{cases}$ **Ans.** $\frac{1}{4} - \frac{2}{\pi^2} \left(\cos(\pi x) + \frac{1}{9} \cos(3\pi x) + \dots \right)$
 $+ \frac{1}{\pi} \left(\sin(\pi x) - \frac{1}{2} \sin(2\pi x) + \dots \right)$
- 12) $f(x) = \sin(\pi x) \quad 0 < x < 1$ **Ans.** $\frac{2}{\pi} - \frac{4}{\pi} \left(\frac{1}{(1)(3)} \cos(2\pi x) + \frac{1}{(3)(5)} \cos(4\pi x) + \dots \right)$
- 13) $f(x) = |x| \quad -1 < x < 1$ **Ans.** $\frac{1}{2} - \frac{4}{\pi^2} \left(\cos(\pi x) + \frac{1}{9} \cos(3\pi x) + \frac{1}{25} \cos(5\pi x) + \dots \right)$
- 14) $f(x) = 1 - x^2 \quad -1 < x < 1$ **Ans.** $\frac{2}{3} + \frac{4}{\pi^2} \left(\cos(\pi x) - \frac{1}{4} \cos(2\pi x) + \frac{1}{9} \cos(3\pi x) - \dots \right)$
 $- \frac{4}{\pi^2} \left(\cos(\pi x) + \frac{1}{9} \cos(3\pi x) + \dots \right)$
- 15) $f(x) = \begin{cases} -1 & -1 < x < 0 \\ 2x & 0 < x < 1 \end{cases}$ **Ans.** $+ \frac{2}{\pi} \left(2 \sin(\pi x) - \frac{1}{2} \sin(2\pi x) + \dots \right)$
- 16) $f(x) = \begin{cases} -x & -1 < x < 0 \\ x & 0 < x < 1 \\ 1 & 1 < x < 3 \end{cases}$ **Ans.** $\frac{3}{4} - \frac{4}{\pi^2} \left(\cos\left(\frac{\pi x}{2}\right) + \frac{1}{2} \cos(\pi x) + \frac{1}{9} \cos\left(\frac{3\pi x}{2}\right) \right)$
 $+ \frac{1}{25} \cos\left(\frac{5\pi x}{2}\right) + \frac{1}{18} \cos(3\pi x) + \dots$

Odd and Even Functions

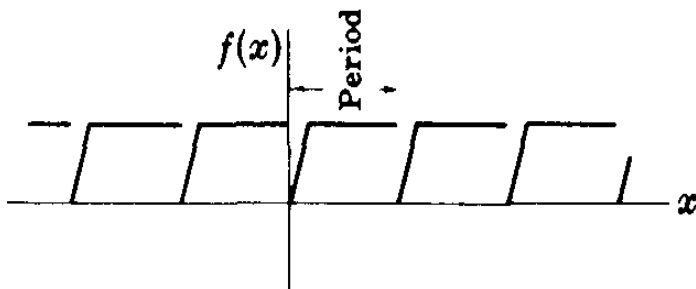
A function $f(x)$ is *odd* if $f(-x) = -f(x)$. Thus x^3 , $x^5 - 3x^3 + 2x$, $\sin(x)$, $\tan(3x)$ are odd functions. The figure below is an example of an odd function.



A function $f(x)$ is *even* if $f(-x) = f(x)$. Thus x^4 , $2x^6 - 4x^2 + 5$, $\cos(x)$, $e^x + e^{-x}$ are even functions. The figure below is an example of an even function.



while the figure below is neither odd nor even function.



Example

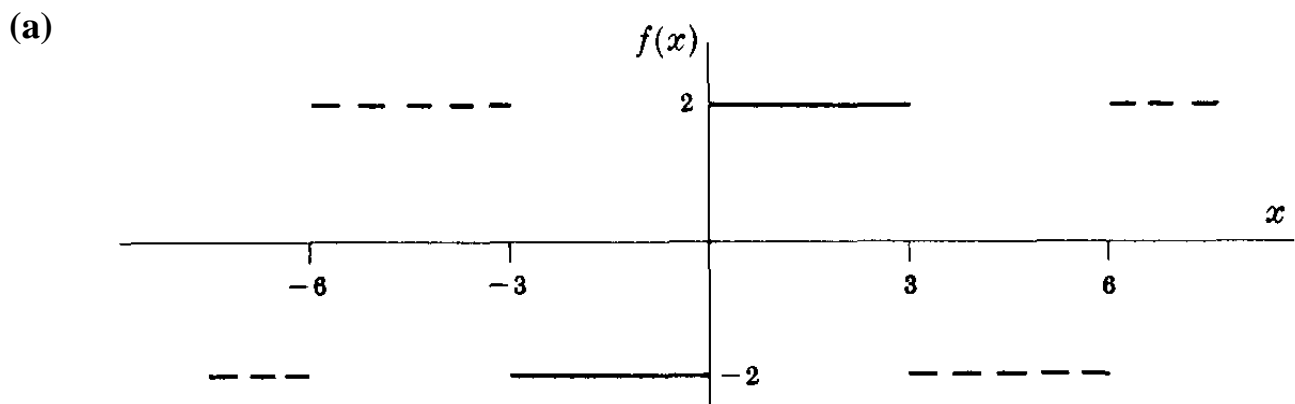
Classify each of the following functions according as they are even, odd, or neither even nor odd.

$$(a) f(x) = \begin{cases} 2 & 0 < x < 3 \\ -2 & -3 < x < 0 \end{cases} \quad \text{Period} = 6$$

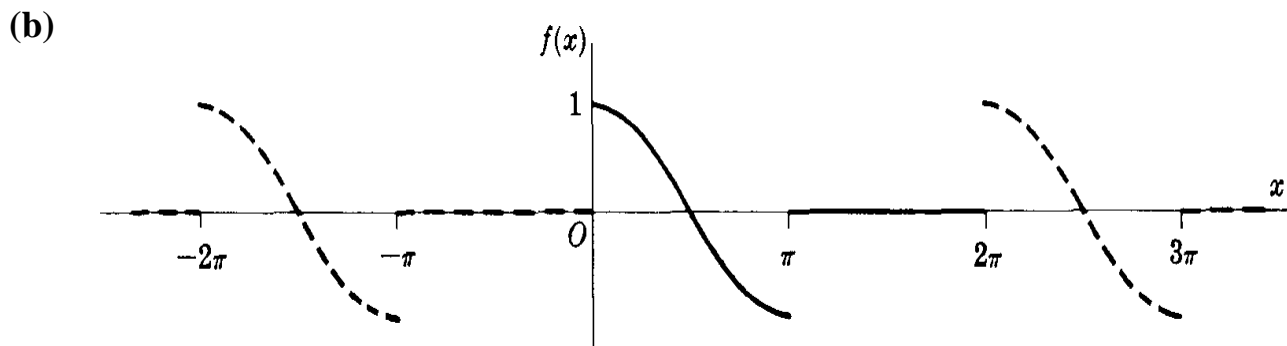
$$(b) f(x) = \begin{cases} \cos(x) & 0 < x < \pi \\ 0 & \pi < x < 2\pi \end{cases} \quad \text{Period} = 2\pi$$

$$(c) f(x) = x(10 - x) \quad 0 < x < 10, \quad \text{Period} = 10$$

Solution

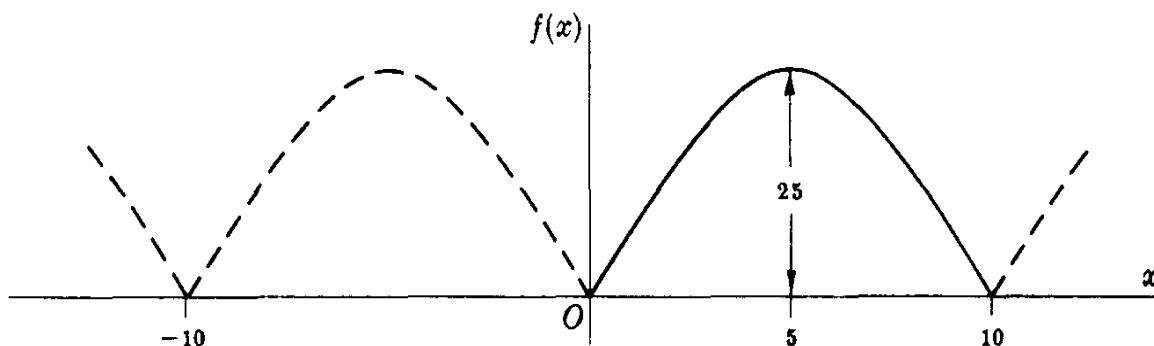


From the figure above it is seen that $f(-x) = -f(x)$, so that the function is odd.



From the above figure it is seen that the function is neither even nor odd

(c)



From the figure above it is seen that $f(-x) = f(x)$, so that the function is even.

Note:

In the Fourier series corresponding to an odd function, only sine terms can be present. In the Fourier series corresponding to an even function, only cosine terms (and possibly a constant) can be present.

Exercises

Are the following functions even, odd, or neither even nor odd?

- | | |
|----------------|---|
| 1) e^x | <i>Ans. Neither even nor odd</i> |
| 2) e^{x^2} | <i>Ans. Even</i> |
| 3) $\sin(nx)$ | <i>Ans. Odd</i> |
| 4) $x \sin(x)$ | <i>Ans. Even</i> |
| 5) $\cos(x)/x$ | <i>Ans. Odd</i> |
| 6) $\ln(x)$ | <i>Ans. Neither even nor odd</i> |
| 7) $\sin(x^2)$ | <i>Ans. Even</i> |

- 8) $\sin^2(x)$ *Ans. Even*
- 9) $|x|$ *Ans. Even*
- 10) $x^2 \sin(nx)$ *Ans. Odd*
- 11) $x + x^2$ *Ans. Neither even nor odd*
- 12) $e^{-|x|}$ *Ans. Even*
- 13) $x \cosh(x)$ *Ans. Odd*

Are the following functions, which are assumed to be periodic, even, odd, or neither even nor odd?

- 1) $f(x) = x \quad -\pi < x < \pi$ *Ans. Odd*
- 2) $f(x) = x|x| \quad -\pi < x < \pi$ *Ans. Odd*
- 3) $f(x) = \begin{cases} x & 0 < x < \pi \\ 0 & \pi < x < 2\pi \end{cases}$ *Ans. Neither even nor odd*
- 4) $f(x) = \begin{cases} x & -\pi/2 < x < \pi/2 \\ 0 & \pi/2 < x < 3\pi/2 \end{cases}$ *Ans. Odd*
- 5) $f(x) = x^3 \quad -\pi < x < \pi$ *Ans. Odd*
- 6) $f(x) = e^{-4x} \quad -\pi < x < \pi$ *Ans. Neither even nor odd*
- 7) $f(x) = x|x| - x^3 \quad -\pi < x < \pi$ *Ans. Odd*
- 8) $f(x) = \begin{cases} 1/(1+x^2) & -\pi < x < 0 \\ -1/(1+x^2) & 0 < x < \pi \end{cases}$ *Ans. Odd*

Find the Fourier Series for the following periodic functions (Even & Odd)

$$1) \quad f(x) = \begin{cases} 1 & -\pi/2 < x < \pi/2 \\ 0 & \pi/2 < x < 3\pi/2 \end{cases} \quad \text{Ans.} \quad \frac{1}{2} + \frac{2}{\pi} \left(\cos(x) - \frac{1}{3} \cos(3x) + \frac{1}{5} \cos(5x) - \dots \right)$$

$$2) \quad f(x) = \begin{cases} x & -\pi/2 < x < \pi/2 \\ \pi - x & \pi/2 < x < 3\pi/2 \end{cases} \quad \text{Ans.} \quad \frac{4}{\pi} \left(\sin(x) - \frac{1}{9} \sin(3x) + \frac{1}{25} \sin(5x) - \dots \right)$$

$$3) \quad f(x) = \begin{cases} -x & -\pi < x < 0 \\ x & 0 < x < \pi \end{cases} \quad \text{Ans.} \quad \frac{\pi}{2} - \frac{4}{\pi} \left(\cos(x) + \frac{1}{9} \cos(3x) + \frac{1}{25} \cos(5x) + \dots \right)$$

$$4) \quad f(x) = \frac{x^2}{4} \quad -\pi < x < \pi \quad \text{Ans.} \quad \frac{\pi^2}{12} - \cos(x) + \frac{1}{4} \cos(2x) - \frac{1}{9} \cos(3x) + \dots$$

$$5) \quad f(x) = \pi - |x| \quad -\pi < x < \pi \quad \text{Ans.} \quad \frac{\pi}{2} + \frac{4}{\pi} \left(\cos(x) + \frac{1}{9} \cos(3x) + \frac{1}{25} \cos(5x) + \dots \right)$$

$$6) \quad f(x) = \begin{cases} 2 & -2 < x < 0 \\ 0 & 0 < x < 2 \end{cases} \quad \text{Ans.} \quad 1 - \frac{4}{\pi} \left(\sin\left(\frac{\pi x}{2}\right) + \frac{1}{3} \sin\left(\frac{3\pi x}{2}\right) + \frac{1}{5} \sin\left(\frac{5\pi x}{2}\right) + \dots \right)$$