



Ministry of Higher Education and Scientific Research
Almustaqbal University, College of Engineering
And Engineering Technologies
Computer Technology Engineering Department

THREE WEEK :

Parallel Circuits (Resistances in Parallel) & Current Divider Rule.

Course Name : Electrical Engineering Fundamentals

Academic Year : 2024-2025

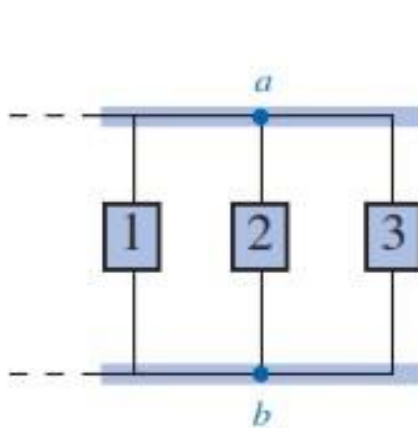
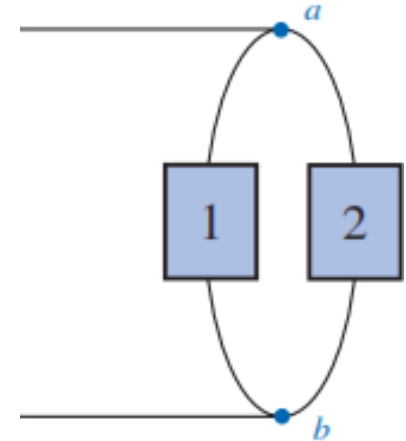
Stage : One

Lecturer. Zahraa Hazim Al-Fatlawy

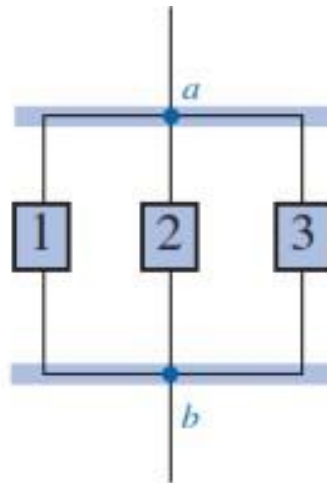
zahraa.hazim@uomus.edu.iq

PARALLEL DC CIRCUITS

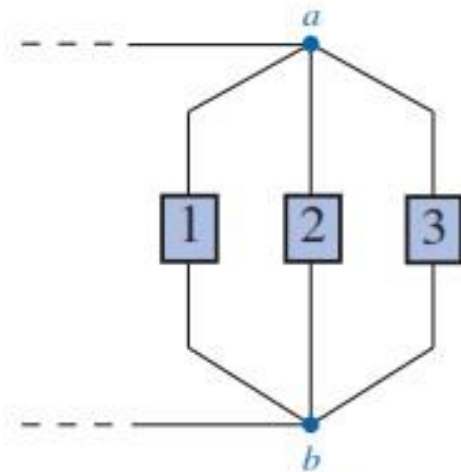
Two elements, branches, or networks are in parallel if they have two points in common.



(a)



(b)



(c)

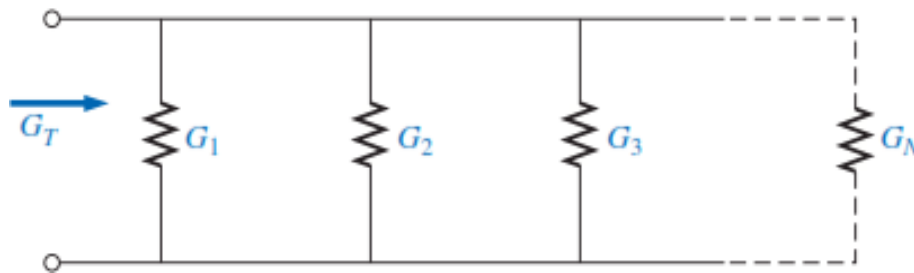
Different ways in which three parallel elements may appear.

TOTAL CONDUCTANCE AND RESISTANCE

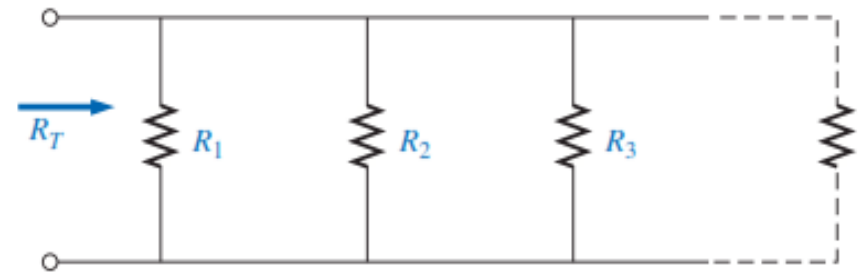
Recall that for series resistors, the total resistance is the sum of the resistor values.

For parallel elements, the total conductance is the sum of the individual conductances.

$$G_T = G_1 + G_2 + G_3 + \cdots + G_N$$



$$\frac{1}{R_T} = \frac{1}{R_1} + \frac{1}{R_2} + \frac{1}{R_3} + \cdots + \frac{1}{R_N}$$

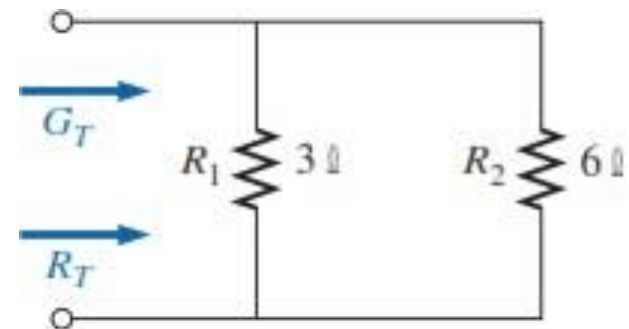


EXAMPLE 3.1 Determine the total conductance and resistance for the parallel network of Fig. shown.

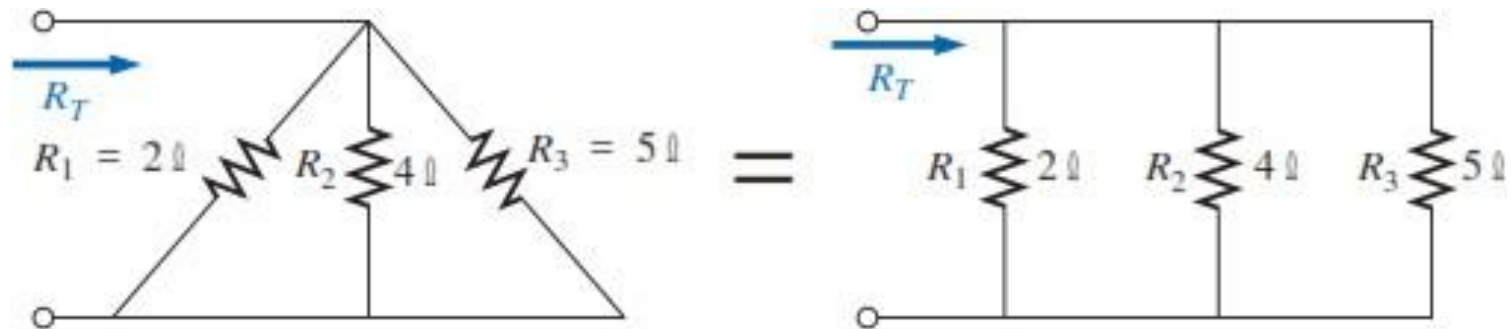
$$G_T = G_1 + G_2 = \frac{1}{3 \, \Omega} + \frac{1}{6 \, \Omega} = 0.333 \, \text{S} + 0.167 \, \text{S} = \mathbf{0.5 \, \text{S}}$$

and

$$R_T = \frac{1}{G_T} = \frac{1}{0.5 \, \text{S}} = \mathbf{2 \, \Omega}$$



EXAMPLE 3.2 Determine the total resistance for the network of Fig. shown.



$$\begin{aligned}\frac{1}{R_T} &= \frac{1}{R_1} + \frac{1}{R_2} + \frac{1}{R_3} \\ &= \frac{1}{2\ \Omega} + \frac{1}{4\ \Omega} + \frac{1}{5\ \Omega} = 0.5\ \text{S} + 0.25\ \text{S} + 0.2\ \text{S} \\ &= 0.95\ \text{S}\end{aligned}$$

$$\text{and} \quad R_T = \frac{1}{0.95\ \text{S}} = \mathbf{1.053\ \Omega}$$

The total resistance of parallel resistors is always less than the value of the smallest resistor.

For equal resistors in parallel, the equation becomes significantly easier to apply. For N equal resistors in parallel,

$$\frac{1}{R_T} = \underbrace{\frac{1}{R} + \frac{1}{R} + \frac{1}{R} + \dots + \frac{1}{R}}_N$$

$$= N\left(\frac{1}{R}\right)$$

and

$$R_T = \frac{R}{N}$$

and

$$G_T = NG$$

For two parallel resistors, we write

$$\frac{1}{R_T} = \frac{1}{R_1} + \frac{1}{R_2}$$

and

$$R_T = \frac{R_1 R_2}{R_1 + R_2}$$

$$\begin{aligned} \frac{1}{R_T} &= \left(\frac{R_2}{R_2}\right)\frac{1}{R_1} + \left(\frac{R_1}{R_1}\right)\frac{1}{R_2} = \frac{R_2}{R_1 R_2} + \frac{R_1}{R_1 R_2} \\ &= \frac{R_2 + R_1}{R_1 R_2} \end{aligned}$$

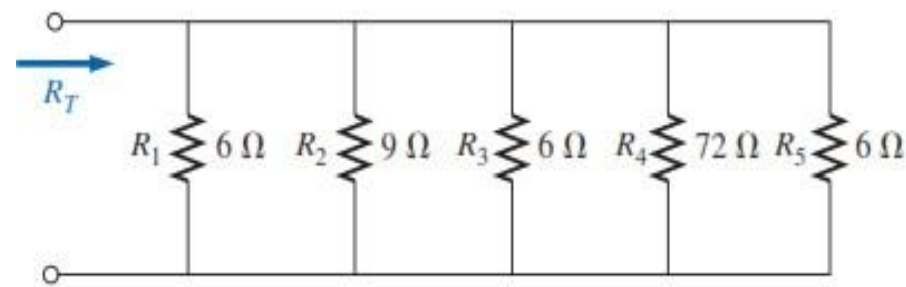
In words, the total resistance of two parallel resistors is the product of the two divided by their sum.

For three parallel resistors,

$$R_T = \frac{1}{\frac{1}{R_1} + \frac{1}{R_2} + \frac{1}{R_3}}$$

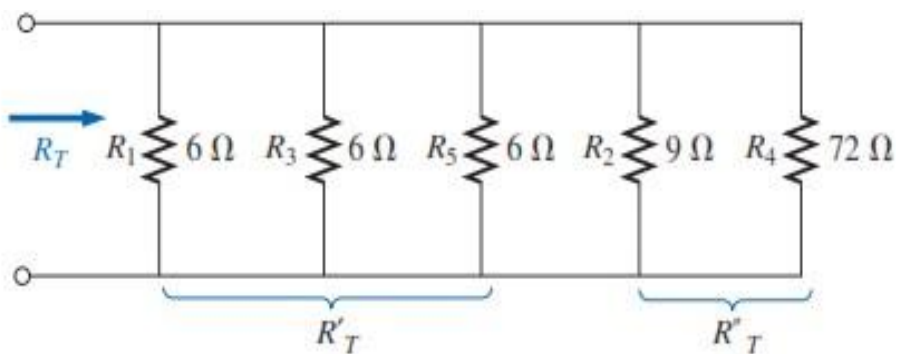
$$R_T = \frac{R_1 R_2 R_3}{R_1 R_2 + R_1 R_3 + R_2 R_3}$$

EXAMPLE 3.3 Calculate the total resistance of the parallel network of Fig. shown.



$$R'_T = \frac{R}{N} = \frac{6\ \Omega}{3} = 2\ \Omega$$

$$R''_T = \frac{R_2 R_4}{R_2 + R_4} = \frac{(9\ \Omega)(72\ \Omega)}{9\ \Omega + 72\ \Omega} = \frac{648\ \Omega}{81} = 8\ \Omega$$

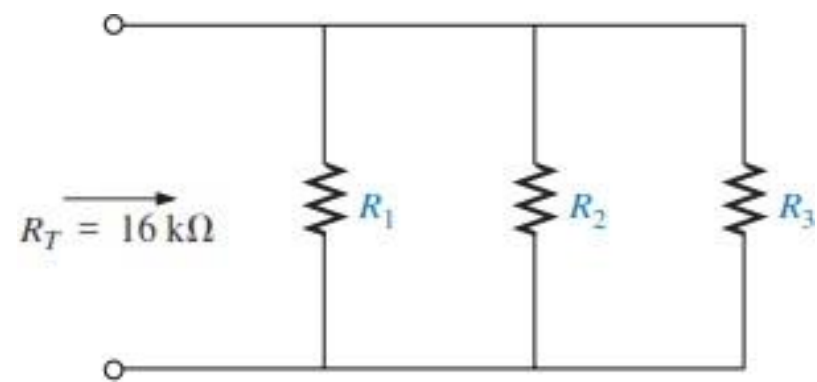


$$R_T = R'_T \parallel R''_T$$

↑
In parallel with

$$= \frac{R'_T R''_T}{R'_T + R''_T} = \frac{(2\ \Omega)(8\ \Omega)}{2\ \Omega + 8\ \Omega} = \frac{16\ \Omega}{10} = \mathbf{1.6\ \Omega}$$

EXAMPLE 3.4 Determine the values of R_1 , R_2 , and R_3 in Fig. shown if $R_2 = 2R_1$ and $R_3 = 2R_2$ and the total resistance is 16 kΩ.



$$\frac{1}{R_T} = \frac{1}{R_1} + \frac{1}{R_2} + \frac{1}{R_3}$$

$$\frac{1}{16\text{ k}\Omega} = \frac{1}{R_1} + \frac{1}{2R_1} + \frac{1}{4R_1}$$

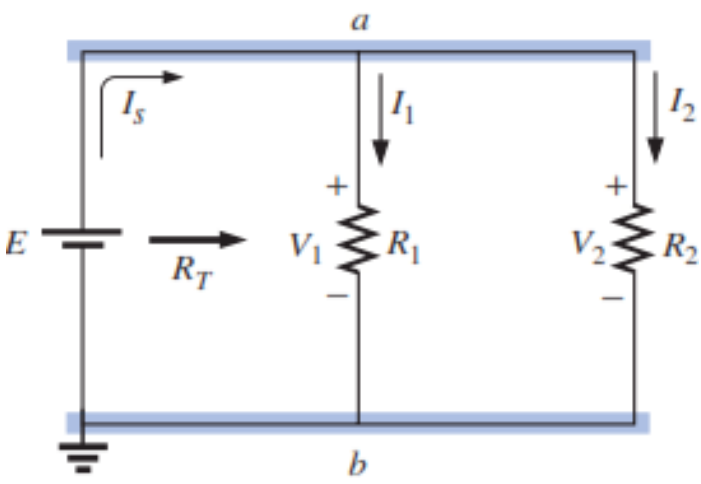
since $R_3 = 2R_2 = 2(2R_1) = 4R_1$

and $\frac{1}{16\text{ k}\Omega} = \frac{1}{R_1} + \frac{1}{2}\left(\frac{1}{R_1}\right) + \frac{1}{4}\left(\frac{1}{R_1}\right)$

$$\frac{1}{16\text{ k}\Omega} = 1.75\left(\frac{1}{R_1}\right)$$

with $R_1 = 1.75(16\text{ k}\Omega) = 28\text{ k}\Omega$

PARALLEL ELEMENTS



$$V_1 = V_2 = E$$

$$I_1 = \frac{V_1}{R_1} = \frac{E}{R_1}$$

$$I_2 = \frac{V_2}{R_2} = \frac{E}{R_2}$$

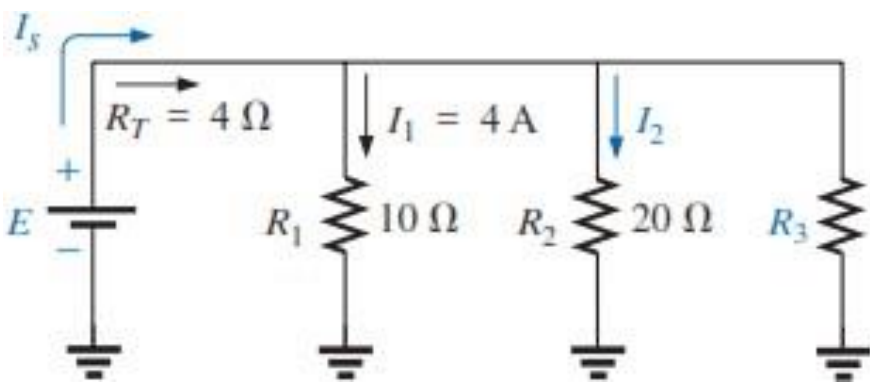
$$E\left(\frac{1}{R_T}\right) = E\left(\frac{1}{R_1} + \frac{1}{R_2}\right)$$

$$\frac{E}{R_T} = \frac{E}{R_1} + \frac{E}{R_2}$$

$$I_s = I_1 + I_2$$

EXAMPLE 3.5 Given the information provided in Fig. shown:

- a. Determine R_3 .
- b. Calculate E .
- c. Find I_s .
- d. Find I_2 .
- e. Determine P_2 .



a.

$$\frac{1}{R_T} = \frac{1}{R_1} + \frac{1}{R_2} + \frac{1}{R_3}$$
$$\frac{1}{4 \Omega} = \frac{1}{10 \Omega} + \frac{1}{20 \Omega} + \frac{1}{R_3}$$
$$0.25 \text{ S} = 0.1 \text{ S} + 0.05 \text{ S} + \frac{1}{R_3}$$
$$0.25 \text{ S} = 0.15 \text{ S} + \frac{1}{R_3}$$
$$\frac{1}{R_3} = 0.1 \text{ S}$$
$$R_3 = \frac{1}{0.1 \text{ S}} = \mathbf{10 \Omega}$$

b. $E = V_1 = I_1 R_1 = (4 \text{ A})(10 \Omega) = \mathbf{40 \text{ V}}$

c. $I_s = \frac{E}{R_T} = \frac{40 \text{ V}}{4 \Omega} = \mathbf{10 \text{ A}}$

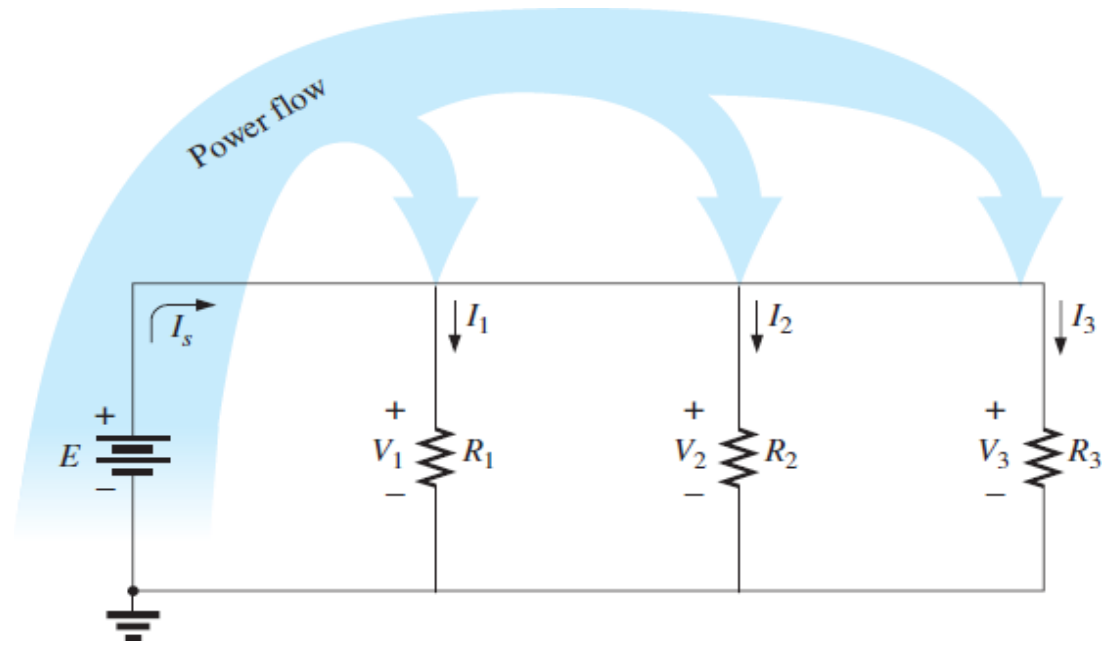
d. $I_2 = \frac{V_2}{R_2} = \frac{E}{R_2} = \frac{40 \text{ V}}{20 \Omega} = \mathbf{2 \text{ A}}$

e. $P_2 = I_2^2 R_2 = (2 \text{ A})^2 (20 \Omega) = \mathbf{80 \text{ W}}$

POWER DISTRIBUTION IN A PARALLEL CIRCUIT

for any network composed of resistive elements, the power applied by the battery will equal that dissipated by the resistive elements.

$$P_E = P_{R_1} + P_{R_2} + P_{R_3}$$



The power delivered by the source

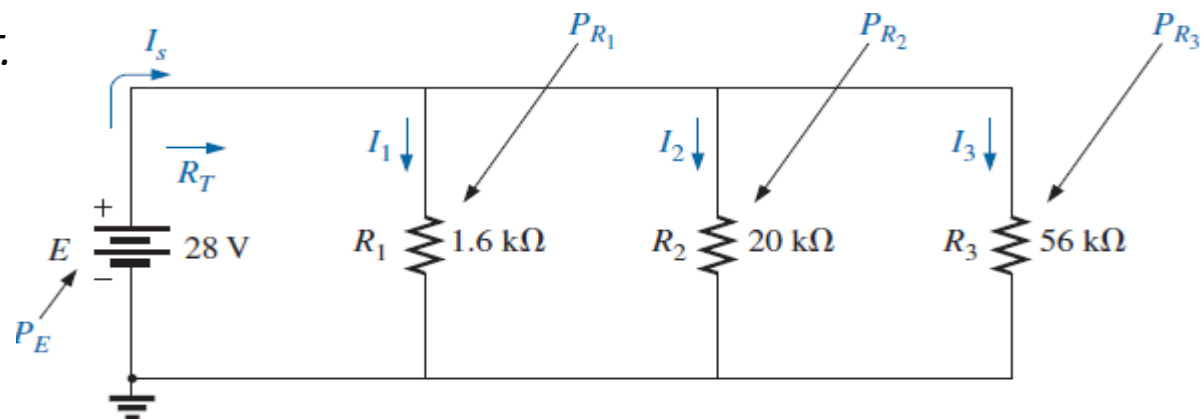
$$P_E = EI_s \quad (\text{watts, W})$$

as is the equation for the power to each resistor (shown for R_1 only):

$$P_1 = V_1 I_1 = I_1^2 R_1 = \frac{V_1^2}{R_1} \quad (\text{watts, W})$$

EXAMPLE 3.7 For the parallel network shown:

- Determine the total resistance R_T .
- Find the source current and the current through each resistor.
- Calculate the power delivered by the source.
- Determine the power absorbed by each parallel resistor.



a. It should now be apparent from previous examples that the total resistance is less than 1.6 kΩ.

$$\begin{aligned} R_T &= \frac{1}{\frac{1}{R_1} + \frac{1}{R_2} + \frac{1}{R_3}} = \frac{1}{\frac{1}{1.6 \text{ k}\Omega} + \frac{1}{20 \text{ k}\Omega} + \frac{1}{56 \text{ k}\Omega}} \\ &= \frac{1}{625 \times 10^{-6} + 50 \times 10^{-6} + 17.867 \times 10^{-6}} = \frac{1}{692.867 \times 10^{-6}} \end{aligned}$$

$$\text{and } R_T = 1.44 \text{ k}\Omega$$

b. Applying Ohm's law:

$$I_s = \frac{E}{R_T} = \frac{28 \text{ V}}{1.44 \text{ k}\Omega} = \mathbf{19.44 \text{ mA}}$$

$$I_1 = \frac{V_1}{R_1} = \frac{E}{R_1} = \frac{28 \text{ V}}{1.6 \text{ k}\Omega} = \mathbf{17.5 \text{ mA}}$$

$$I_2 = \frac{V_2}{R_2} = \frac{E}{R_2} = \frac{28 \text{ V}}{20 \text{ k}\Omega} = \mathbf{1.4 \text{ mA}}$$

$$I_3 = \frac{V_3}{R_3} = \frac{E}{R_3} = \frac{28 \text{ V}}{56 \text{ k}\Omega} = \mathbf{0.5 \text{ mA}}$$

c. $P_E = EI_s = (28 \text{ V})(19.4 \text{ mA}) = \mathbf{543.2 \text{ mW}}$

d. Applying each form of the power equation:

$$P_1 = V_1 I_1 = EI_1 = (28 \text{ V})(17.5 \text{ mA}) = \mathbf{490 \text{ mW}}$$

A review of the results clearly shows the fact that the larger the resistor, the less the power absorbed.

KIRCHHOFF'S CURRENT LAW

Kirchhoff's voltage law provides an important relationship among voltage levels around any closed loop of a network.

We now consider **Kirchhoff's current law (KCL)**, which provides an equally important relationship among current levels at any junction.

Kirchhoff's current law (KCL) states that the algebraic sum of the currents entering and leaving an area, system, or junction is zero.

In other words,

the sum of the currents entering an area, system, or junction must equal the sum of the currents leaving the area, system, or junction.

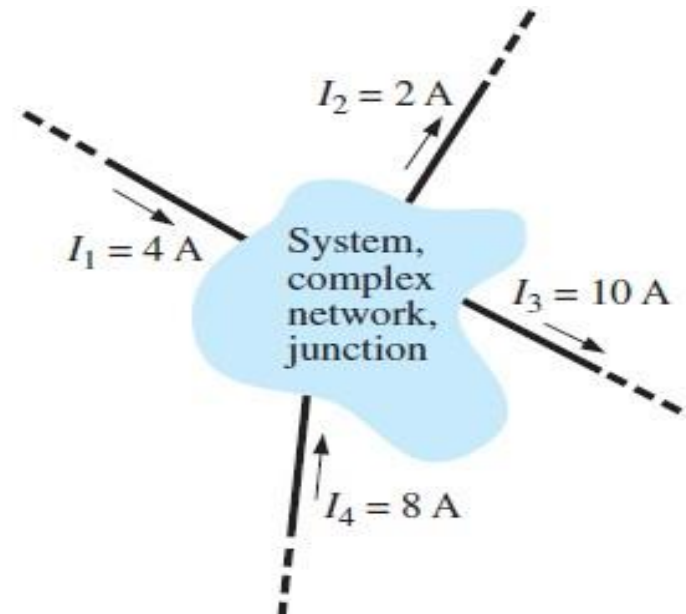
$$\Sigma I_i = \Sigma I_o$$

$$\Sigma I_i = \Sigma I_o$$

$$I_1 + I_4 = I_2 + I_3$$

$$4 \text{ A} + 8 \text{ A} = 2 \text{ A} + 10 \text{ A}$$

$$12 \text{ A} = 12 \text{ A} \quad (\text{checks})$$



EXAMPLE 3.6 Determine I_1 , I_3 , I_4 , and I_5 for the network of Fig. shown.

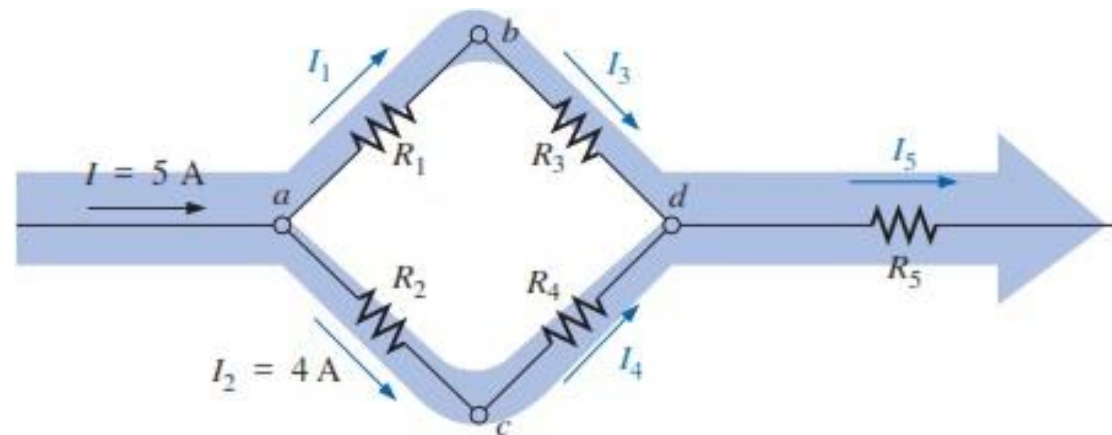
At node a :

$$\sum I_i = \sum I_o$$

$$I = I_1 + I_2$$

$$5 \text{ A} = I_1 + 4 \text{ A}$$

$$I_1 = 5 \text{ A} - 4 \text{ A} = \mathbf{1 \text{ A}}$$



At node b :

$$\sum I_i = \sum I_o$$

$$I_1 = I_3$$

$$I_3 = I_1 = \mathbf{1 \text{ A}}$$

At node d :

$$\sum I_i = \sum I_o$$

$$I_3 + I_4 = I_5$$

$$1 \text{ A} + 4 \text{ A} = I_5 = \mathbf{5 \text{ A}}$$

At node c :

$$\sum I_i = \sum I_o$$

$$I_2 = I_4$$

$$I_4 = I_2 = \mathbf{4 \text{ A}}$$

EXAMPLE 3.7 Find the magnitude and direction of the currents I_3 , I_4 , I_6 , and I_7 for the network of Fig. shown. Even though the elements are not in series or parallel, Kirchhoff's current law can be applied to determine all the unknown currents.

Considering the overall system, we know that the current entering must equal that leaving. Therefore,

$$I_7 = I_1 = \mathbf{10\text{ A}}$$

Applying Kirchhoff's current law at node a ,

$$I_1 + I_3 = I_2$$

$$10\text{ A} + I_3 = 12\text{ A}$$

$$I_3 = 12\text{ A} - 10\text{ A} = \mathbf{2\text{ A}}$$

At node b , since 12 A are entering and 8 A are leaving, I_4 must be leaving. Therefore,

$$I_2 = I_4 + I_5$$

$$12\text{ A} = I_4 + 8\text{ A}$$

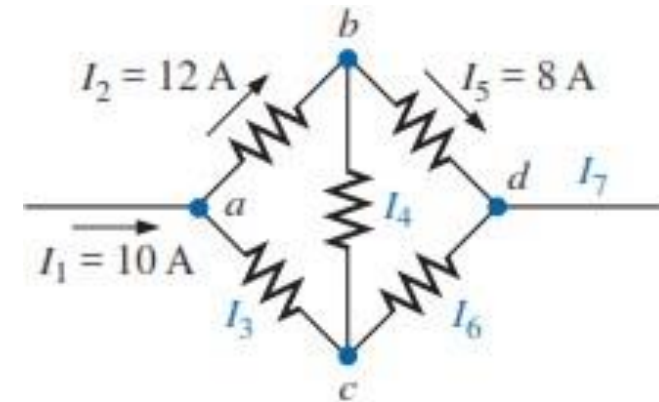
$$I_4 = 12\text{ A} - 8\text{ A} = \mathbf{4\text{ A}}$$

At node c , I_3 is leaving at 2 A and I_4 is entering at 4 A, requiring that I_6 be leaving. Applying Kirchhoff's current law at node c ,

$$I_4 = I_3 + I_6$$

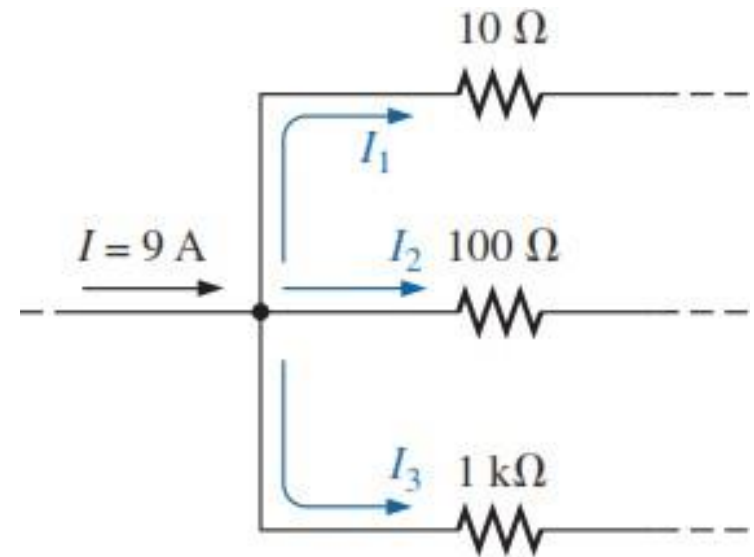
$$4\text{ A} = 2\text{ A} + I_6$$

$$I_6 = 4\text{ A} - 2\text{ A} = \mathbf{2\text{ A}}$$



CURRENT DIVIDER RULE

- The majority of the current will pass through the smallest resistor of $10\ \Omega$, and the least current will pass through the $1\ \text{k}\Omega$ resistor.
- In fact, the current through the $100\ \Omega$ resistor will also exceed that through the $1\ \text{k}\Omega$ resistor.
- By recognizing that the resistance of the $100\ \Omega$ is 10 times that of the $10\ \Omega$ resistor. The result is a current through the $10\ \Omega$ resistor that is 10 times that of the $100\ \Omega$ resistor.
- Similarly, the current through the $100\ \Omega$ resistor is 10 times that through the $1\ \text{k}\Omega$ resistor.



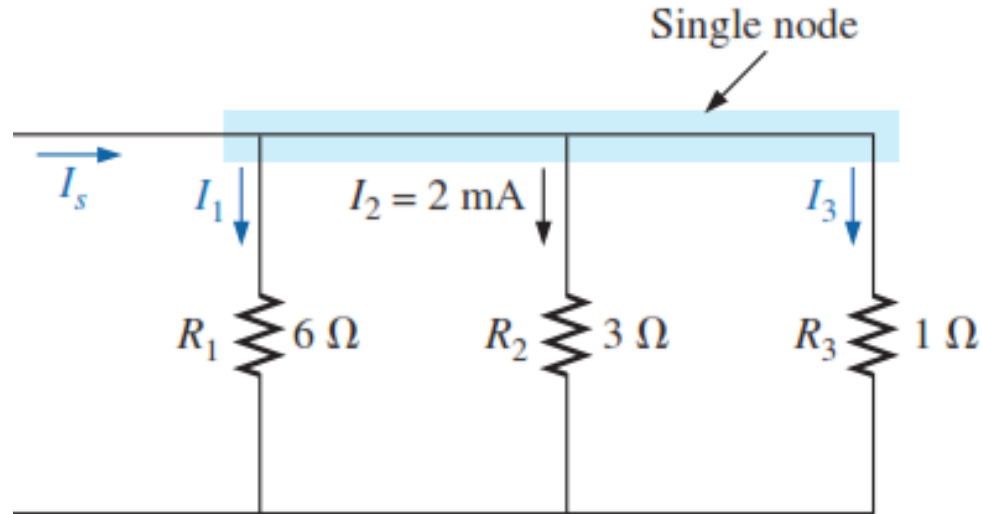
For two parallel elements of equal value, the current will divide equally.

For parallel elements with different values, the smaller the resistance, the greater the share of input current.

For parallel elements of different values, the current will split with a ratio equal to the inverse of their resistor values.

EXAMPLE 3.8

- Determine currents I_1 and I_3 for the network in Fig.
- Find the source current I_s



- Since R_1 is twice R_2 , the current I_1 must be one-half I_2 , and

$$I_1 = \frac{I_2}{2} = \frac{2 \text{ mA}}{2} = \mathbf{1 \text{ mA}}$$

Since R_2 is three times R_3 , the current I_3 must be three times I_2 , and

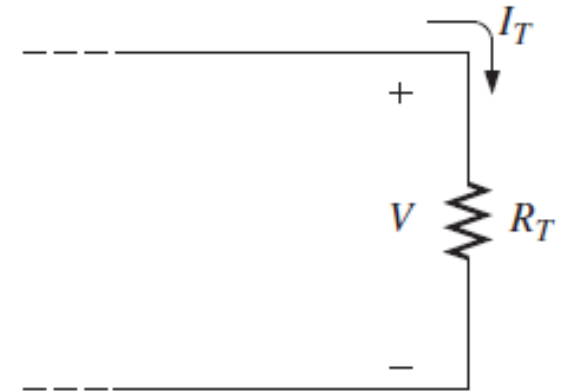
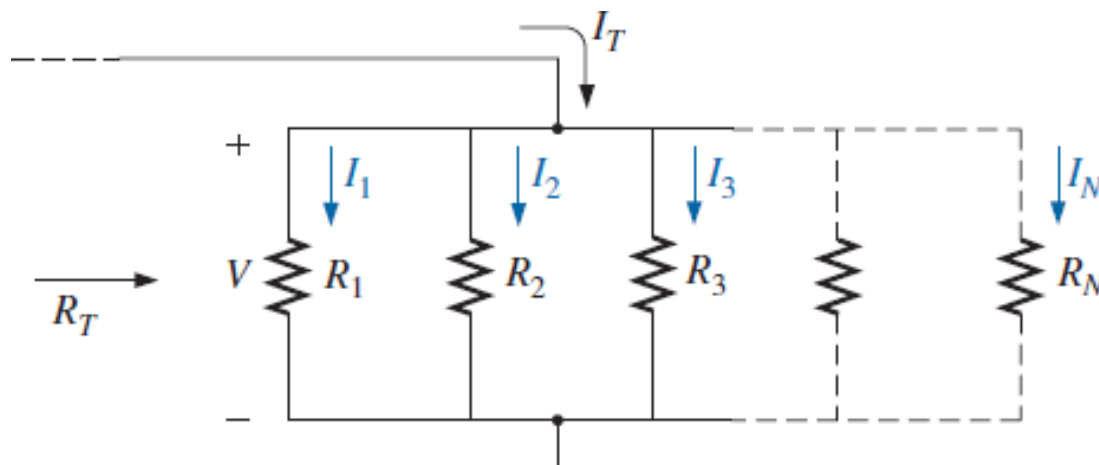
$$I_3 = 3I_2 = 3(2 \text{ mA}) = \mathbf{6 \text{ mA}}$$

- Applying Kirchhoff's current law:

$$\sum I_i = \sum I_o$$

$$I_s = I_1 + I_2 + I_3$$

$$I_s = 1 \text{ mA} + 2 \text{ mA} + 6 \text{ mA} = \mathbf{9 \text{ mA}}$$



The current through any branch of a parallel resistive network is equal to the total resistance of the parallel network divided by the resistor of interest and multiplied by the total current entering the parallel configuration.

The current I_T can then be determined using Ohm's law: $I_T = \frac{V}{R_T}$

Since the voltage V is the same across parallel elements, the following is true:

$$V = I_1 R_1 = I_2 R_2 = I_3 R_3 = \dots = I_x R_x$$

$$I_T = \frac{I_x R_x}{R_T}$$

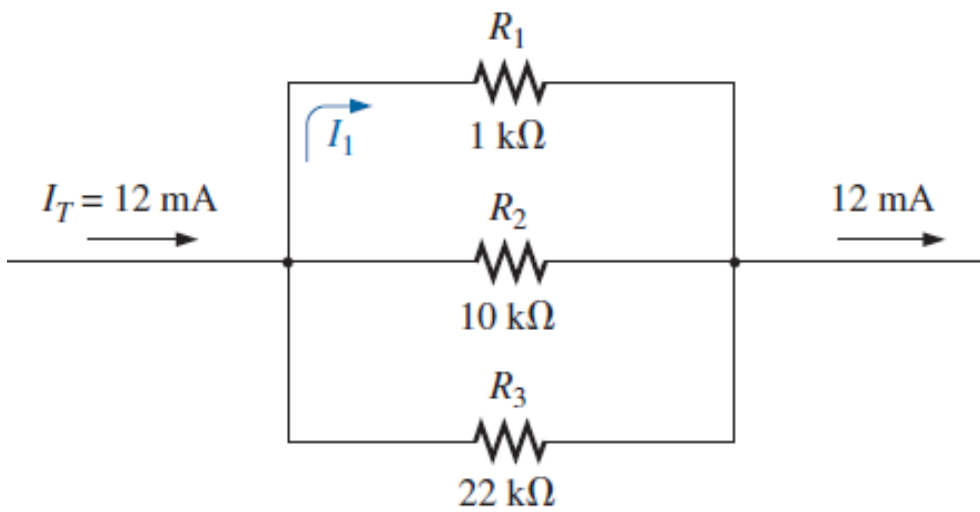
Solving for I_x , the final result is the **current divider rule**:

$$I_x = \frac{R_T}{R_x} I_T$$

EXAMPLE 3.9 For the parallel network shown, determine current I_1 .

$$R_T = \frac{1}{\frac{1}{R_1} + \frac{1}{R_2} + \frac{1}{R_3}}$$
$$= \frac{1}{\frac{1}{1\text{ k}\Omega} + \frac{1}{10\text{ k}\Omega} + \frac{1}{22\text{ k}\Omega}}$$

$$= \frac{1}{1 \times 10^{-3} + 100 \times 10^{-6} + 45.46 \times 10^{-6}}$$
$$= \frac{1}{1.145 \times 10^{-3}} = \mathbf{873.01\ \Omega}$$
$$I_1 = \frac{R_T}{R_1} I_T$$
$$= \frac{(873.01\ \Omega)}{1\text{ k}\Omega} (12\text{ mA}) = (0.873)(12\text{ mA}) = \mathbf{10.48\text{ mA}}$$



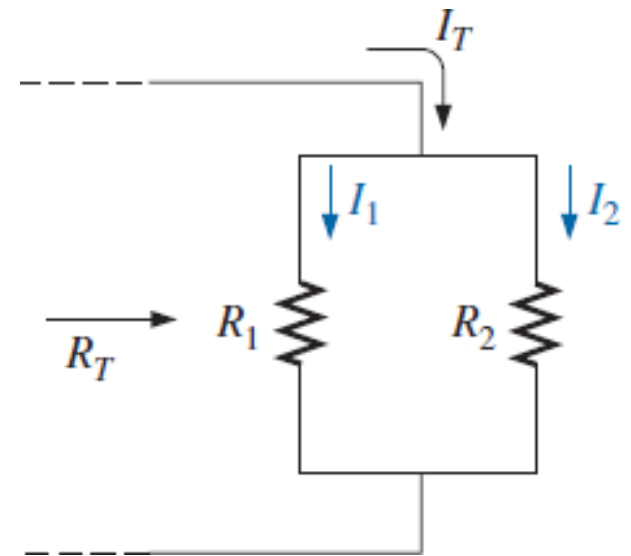
Special Case: Two Parallel Resistors

$$R_T = \frac{R_1 R_2}{R_1 + R_2}$$

$$I_1 = \frac{R_T}{R_1} I_T = \left(\frac{R_1 R_2}{R_1 + R_2} \right) \frac{1}{R_1} I_T$$

$$I_1 = \left(\frac{R_2}{R_1 + R_2} \right) I_T$$

$$I_2 = \left(\frac{R_1}{R_1 + R_2} \right) I_T$$



For two parallel resistors, the current through one is equal to the other resistor times the total entering current divided by the sum of the two resistors.

VOLTAGE SOURCES IN PARALLEL

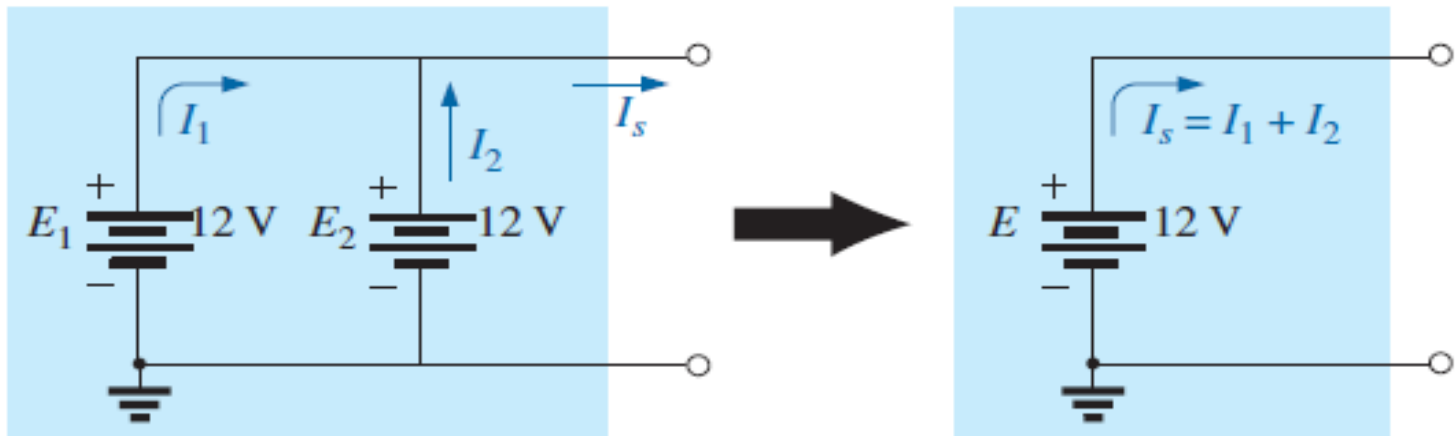
Voltage sources can be placed in parallel only if they have the same voltage.

The primary reason for placing two or more batteries or supplies in parallel is to increase the current rating above that of a single supply.

For example, in Fig shown, two ideal batteries of 12 V have been placed in parallel. The total source current using Kirchhoff's current law is now the sum of the rated currents of each supply. The resulting power available will be twice that of a single supply if the rated supply current of each is the same. That is,

with $I_1 = I_2 = I$

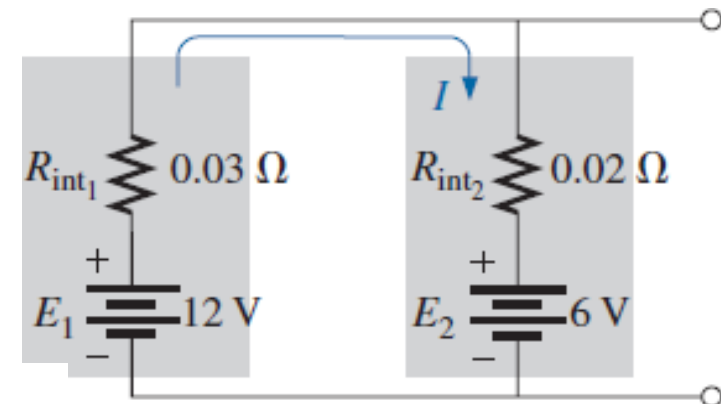
then $P_T = E(I_1 + I_2) = E(I + I) = E(2I) = 2(EI) = 2P_{(\text{one supply})}$



If for some reason two batteries of different voltages are placed in parallel, both will become ineffective or damaged because the battery with the larger voltage rapidly discharges through the battery with the smaller terminal voltage.

The only current-limiting resistors in the network are the internal resistances, resulting in a very high discharge current for the battery with the larger supply voltage.

$$I = \frac{E_1 - E_2}{R_{\text{int}_1} + R_{\text{int}_2}} = \frac{12 \text{ V} - 6 \text{ V}}{0.03 \Omega + 0.02 \Omega} = \frac{6 \text{ V}}{0.05 \Omega} = 120 \text{ A}$$



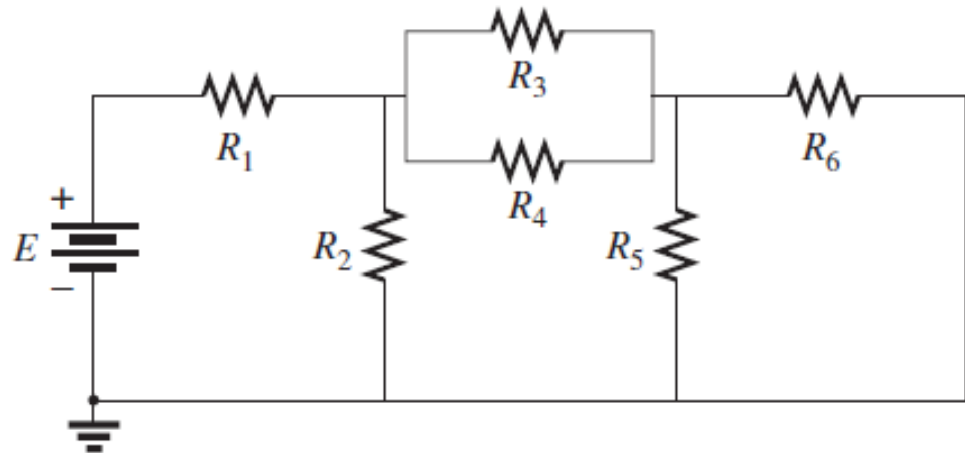
PROBLEMS

SECTION 6.2 Parallel Resistors

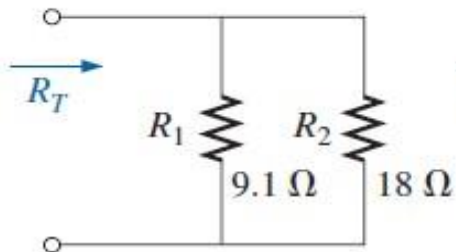
2. For the network in Fig. :

a. Find the elements (voltage sources and/or resistors) that are in parallel.

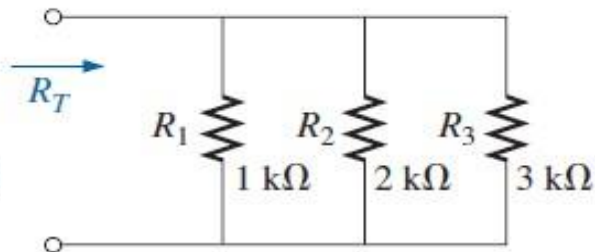
b. Find the elements (voltage sources and/or resistors) that are in series.



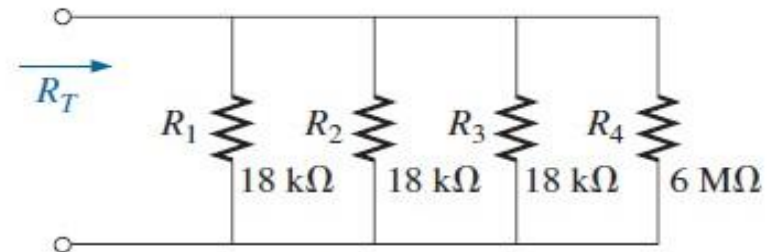
3. Find the total resistance for each configuration in Fig. Note that only standard value resistors were used.



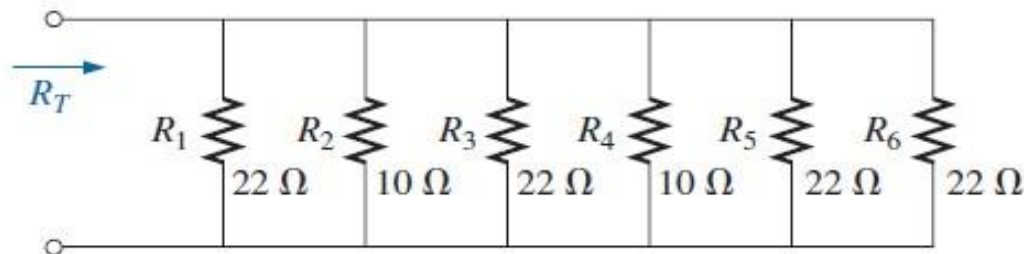
(a)



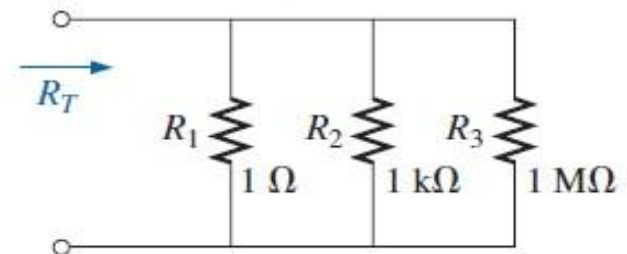
(b)



(d)

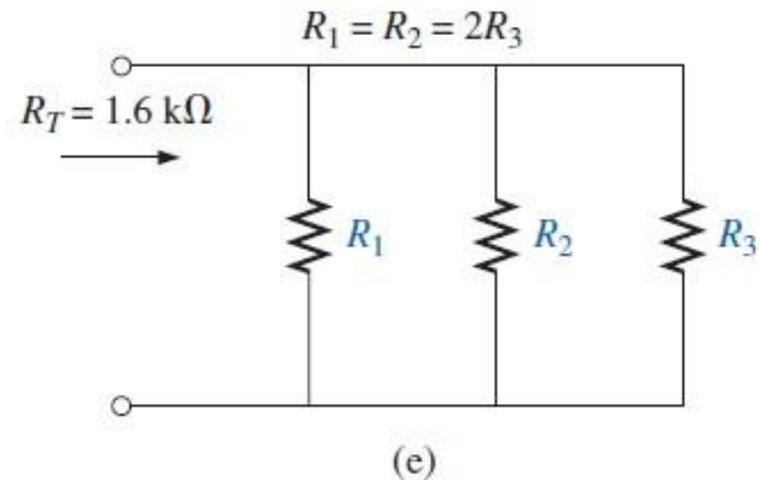
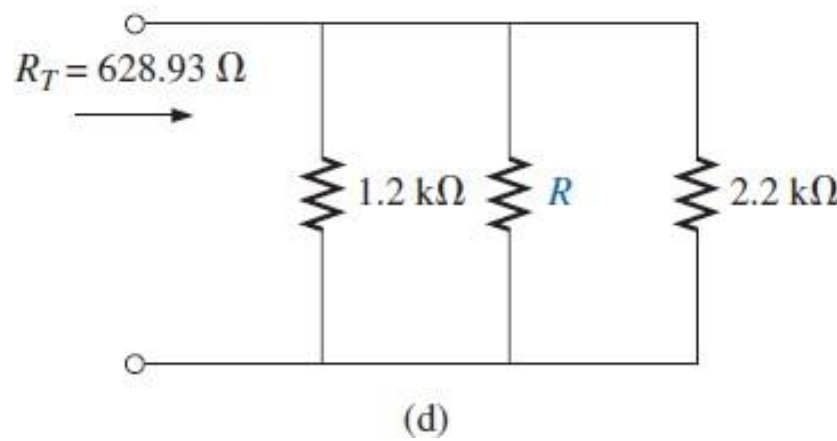
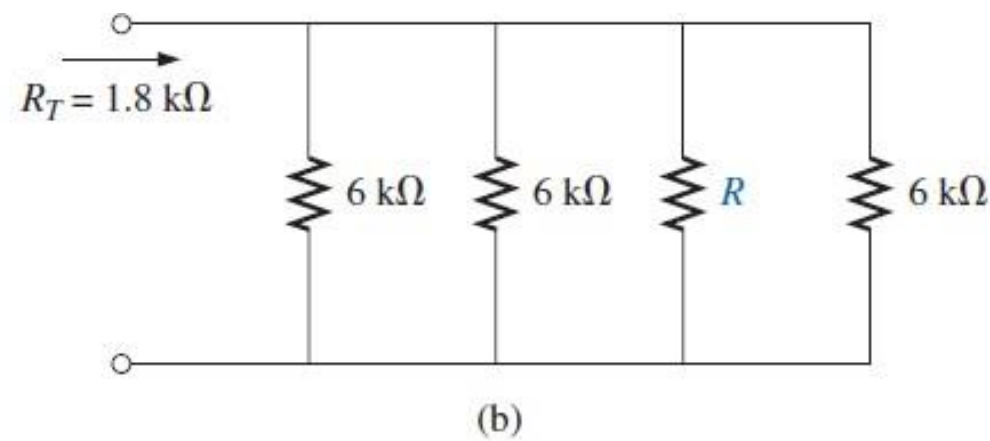
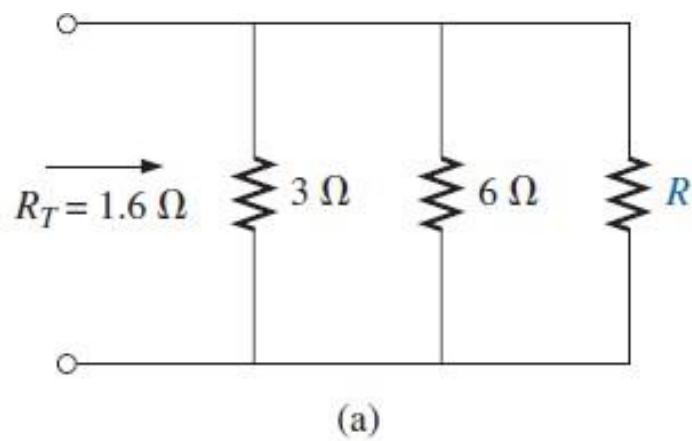


(e)

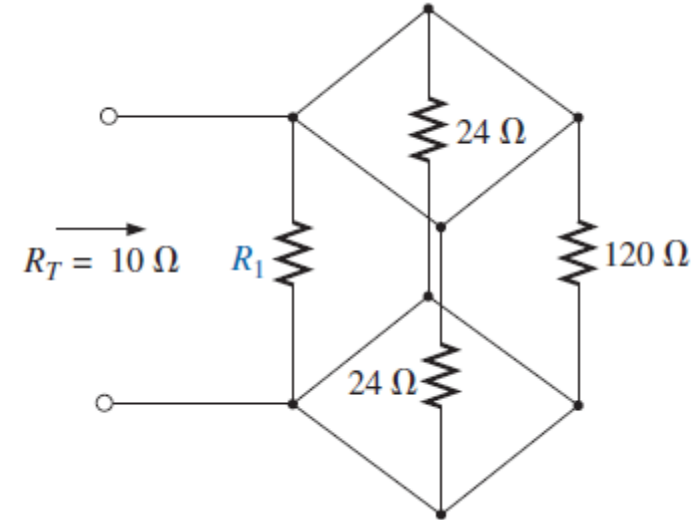


(f)

5. The total resistance of each of the configurations in Fig. is specified. Find the unknown resistance.



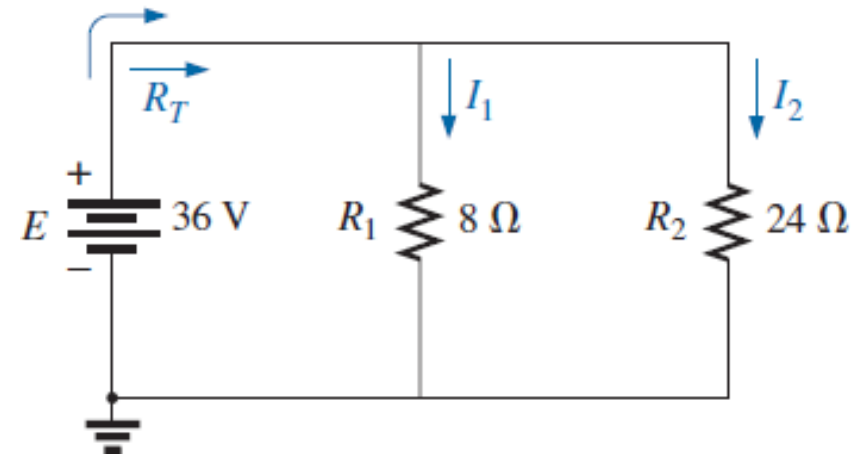
9. Determine R_1 for the network in Fig.



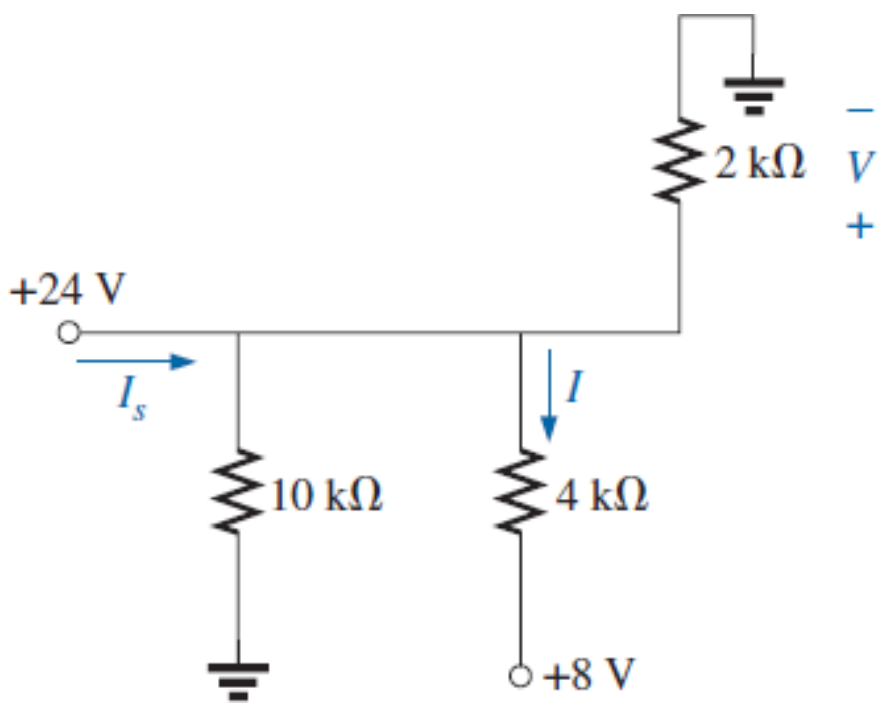
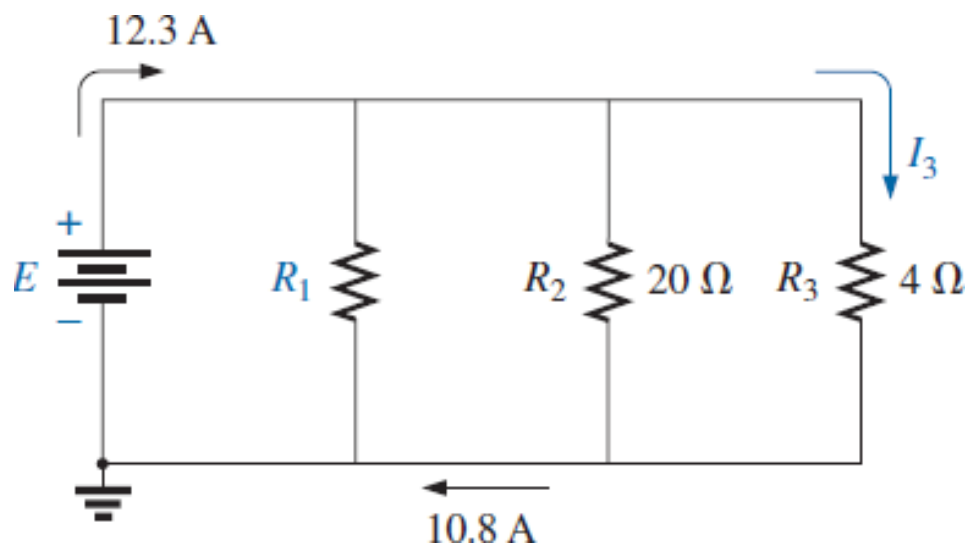
SECTION 6.3 Parallel Circuits

10. For the parallel network in Fig. :

- Find the total resistance.
- What is the voltage across each branch?
- Determine the source current and the current through each branch.
- Verify that the source current equals the sum of the branch currents.



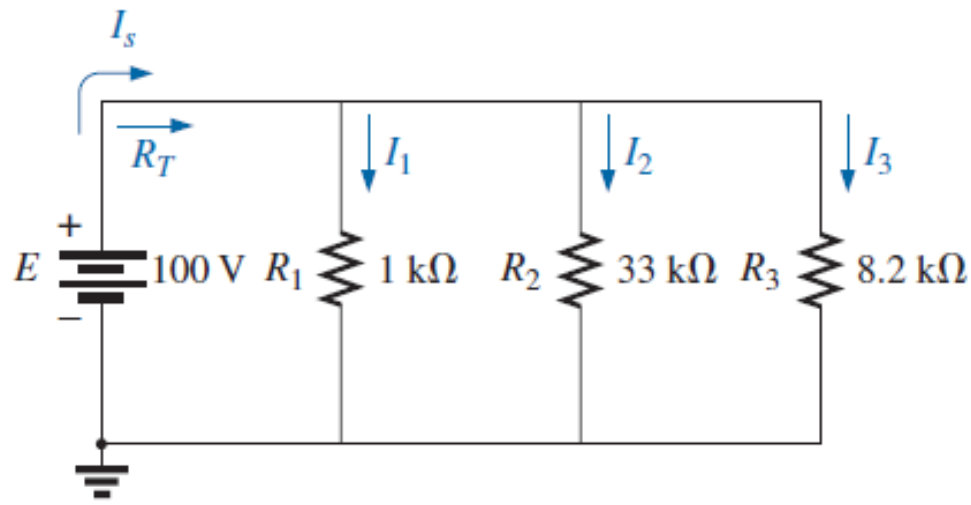
16. Given the information provided in Fig. , find the unknown quantities: E , R_1 , and I_3 .



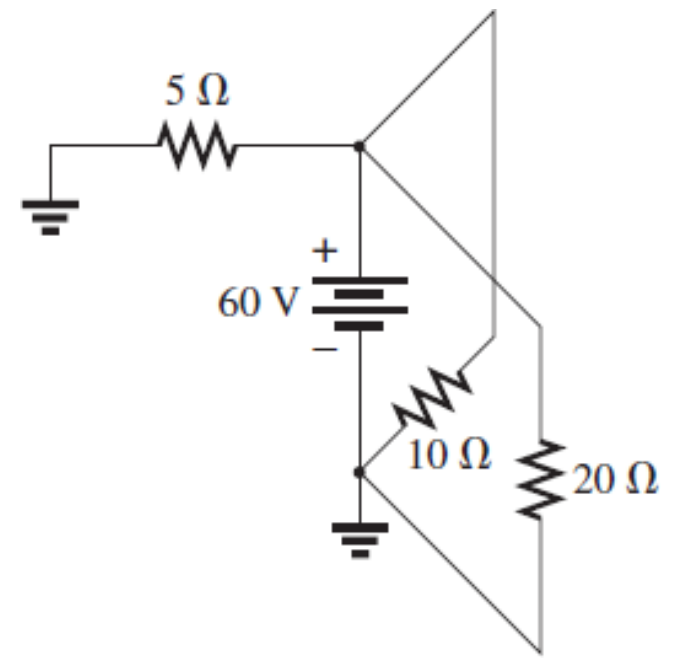
- 18.** For the network in Fig. :
- a. Find the current I .
 - b. Determine the voltage V .
 - c. Calculate the source current I_s .

SECTION 6.4 Power Distribution in a Parallel Circuit

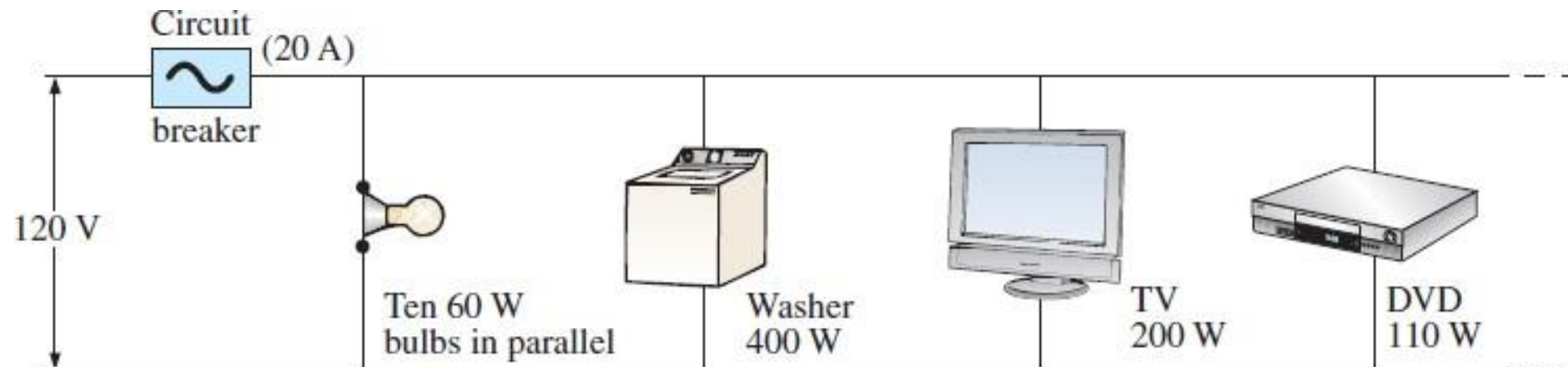
- 19.** For the configuration in Fig. :
- a. Find the total resistance and the current through each branch.
 - b. Find the power delivered to each resistor.
 - c. Calculate the power delivered by the source.
 - d. Compare the power delivered by the source to the sum of the powers delivered to the resistors.
 - e. Which resistor received the most power? Why?



- 21.** Determine the power delivered by the dc battery in Fig.

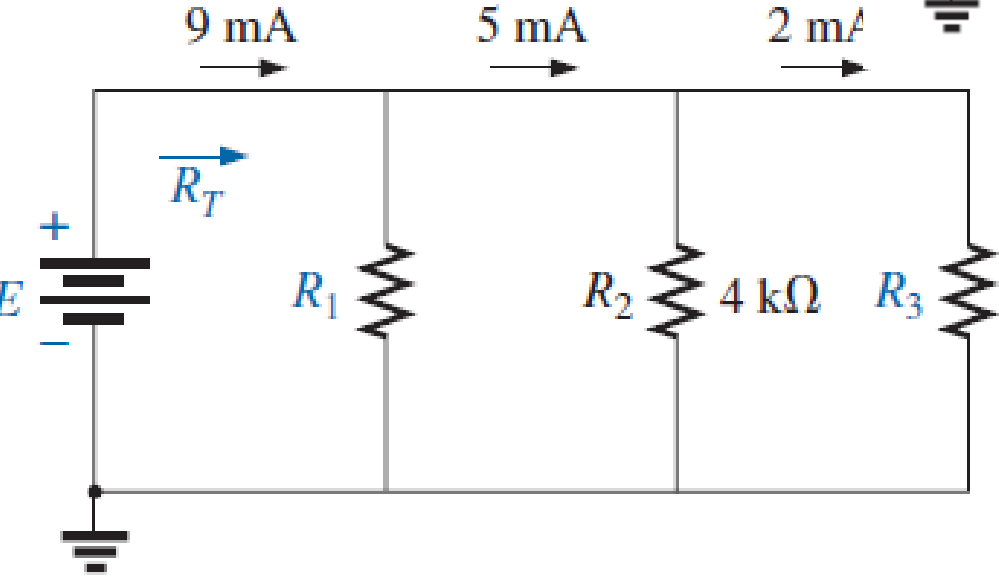
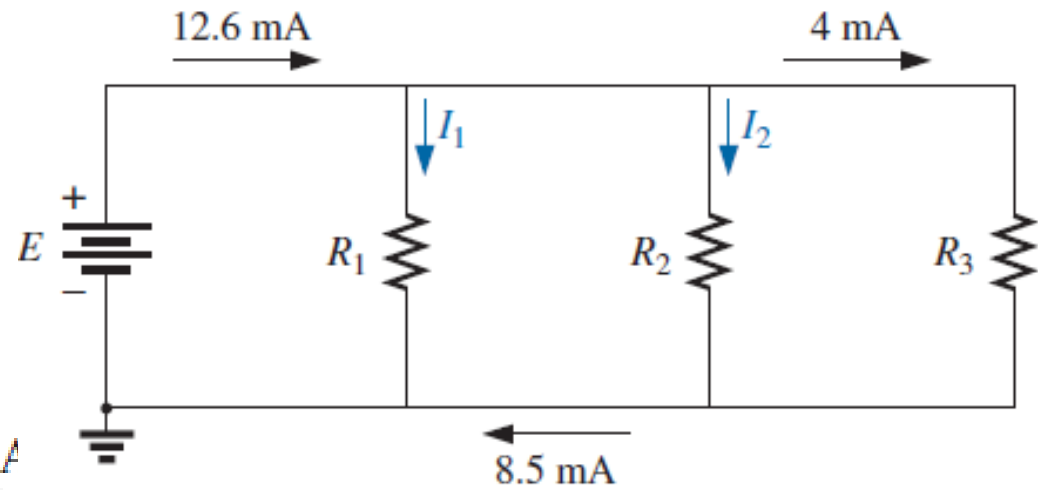


- 22.** A portion of a residential service to a home is depicted in Fig.
- Determine the current through each parallel branch of the system.
 - Calculate the current drawn from the 120 V source. Will the 20 A breaker trip?
 - What is the total resistance of the network?
 - Determine the power delivered by the source. How does it compare to the sum of the wattage ratings appearing in Fig.?



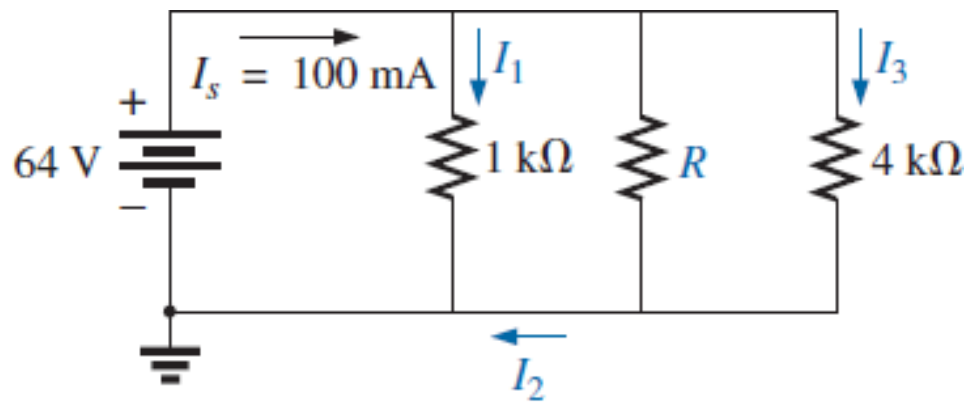
SECTION 6.5 Kirchhoff's Current Law

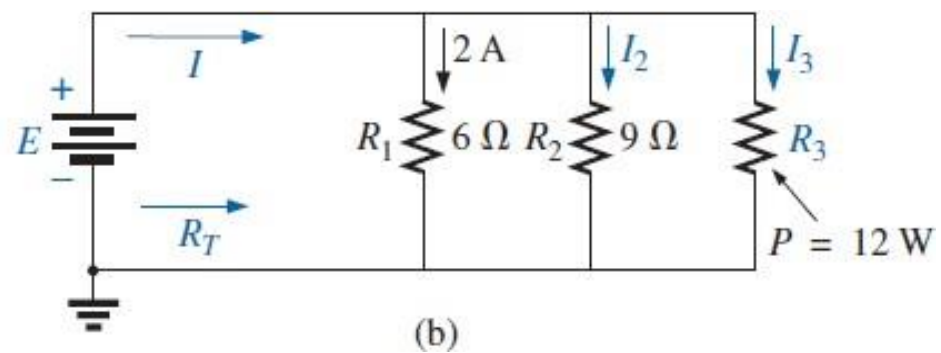
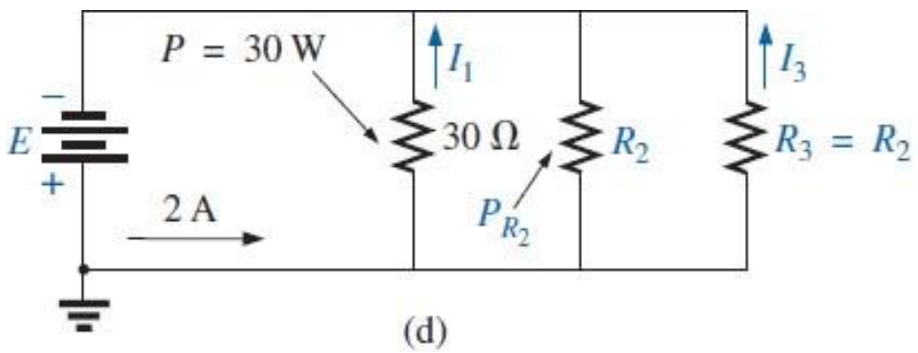
24. Using Kirchhoff's current law, determine the unknown currents for the parallel network in Fig.



28. Find the unknown quantities for the networks in Fig. using the information provided.

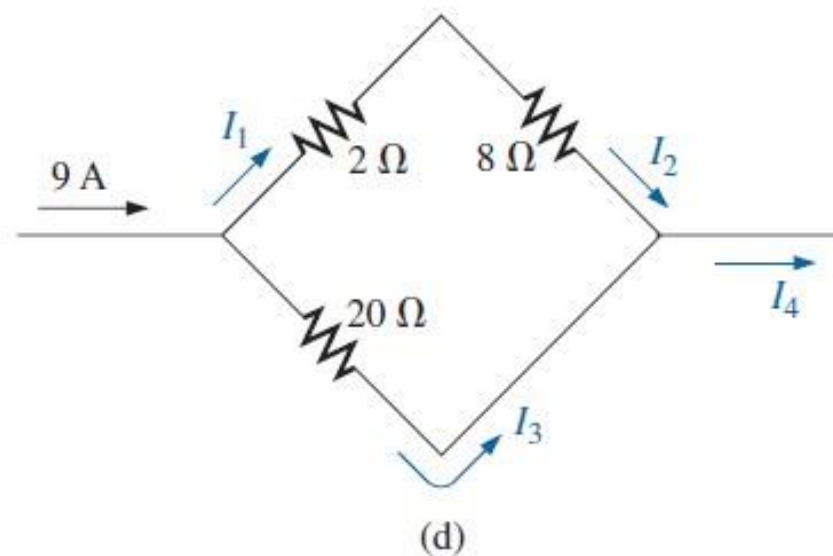
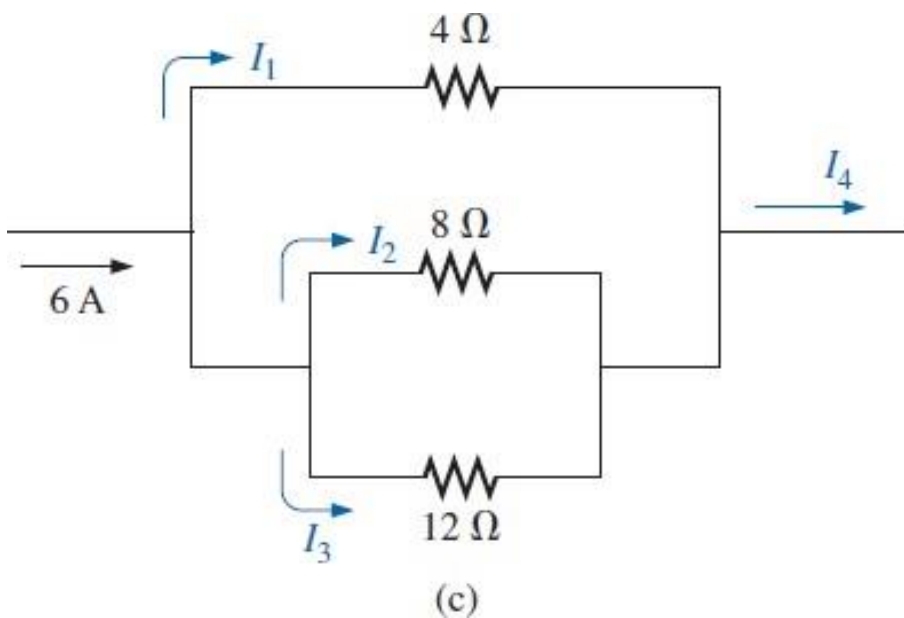
27. Using the information provided in Fig. , find the branch resistors R_1 and R_3 , the total resistance R_T , and the voltage source E .



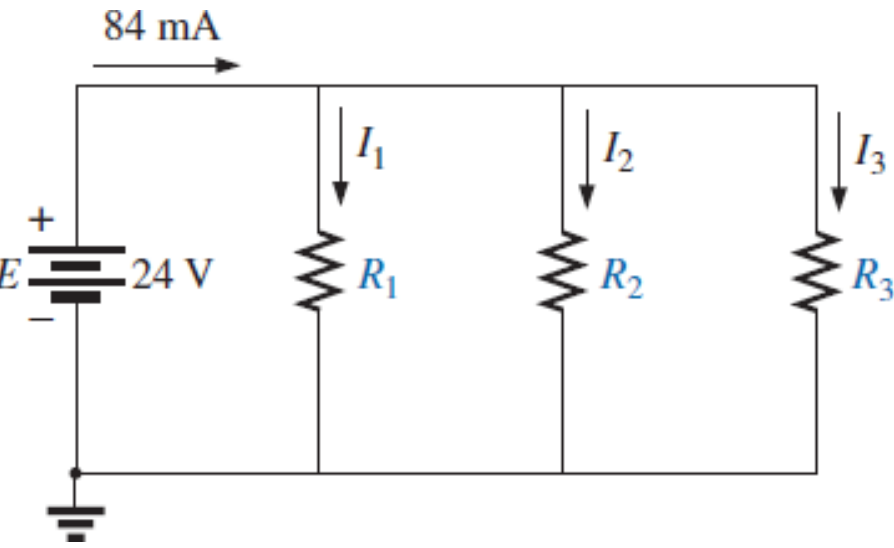


SECTION 6.6 Current Divider Rule

30. Determine the currents for the configurations in Fig.

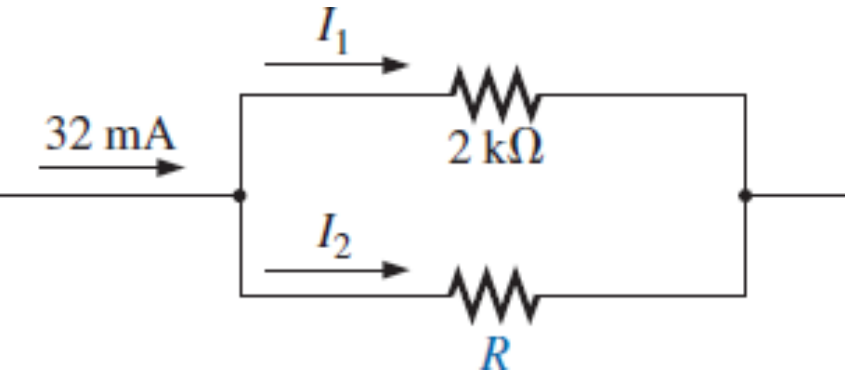
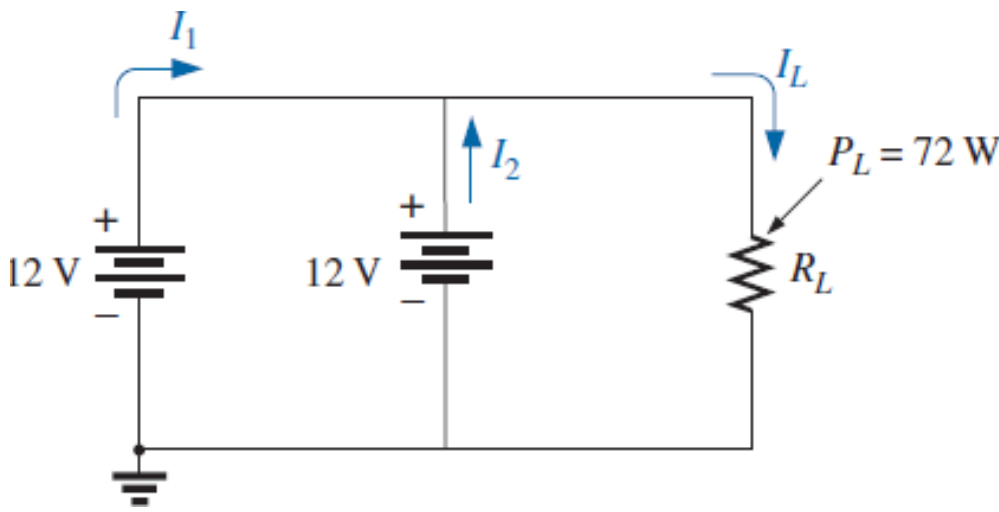


33. a. Find resistor R for the network in Fig. that will ensure that $I_1 = 3I_2$.
b. Find I_1 and I_2 .



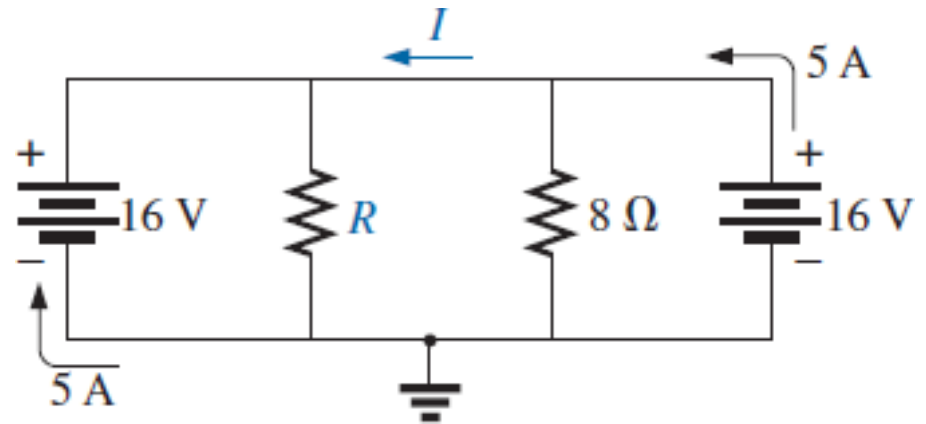
SECTION 6.7 Voltage Source in Parallel

35. Assuming identical supplies in Fig.
a. Find the indicated currents.
b. Find the power delivered by each source.
c. Find the total power delivered by both sources, and compare it to the power delivered to the load R_L .



34. Design the network in Fig. such that $I_2 = 2I_1$ and $I_3 = 2I_2$.

37. Assuming identical supplies, determine the current I and resistance R for the parallel network in Fig.



Thank you very much

