



**Department of biology**



**Department of biology**

**Organic Chemistry**

**Lecture 3**

**Alkenes**

**By**

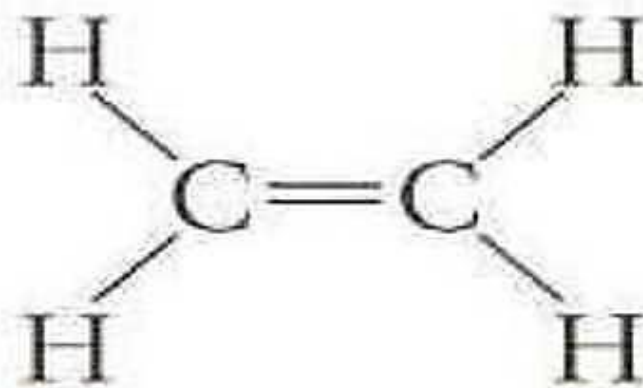
**Dr. Assel Amer Hadi**

# Alkenes

1. Members of the alkene group have a double bond between two carbon atoms.
2. One hydrogen atom has been removed from two adjacent carbon atoms, thereby allowing the two adjacent carbon atoms to form a double bond.

General formula is  **$C_nH_{2n}$**

Begins with **Ethene (ethylene)**



**Ethene (ethylene)**

## Some Members of the Alkene Series

Name	Molecular Formula	Condensed Structural Formula
Ethene (ethylene)	$C_2H_4$	$CH_2=CH_2$
Propene	$C_3H_6$	$CH_3CH=CH_2$
1-Butene	$C_4H_8$	$CH_3CH_2CH=CH_2$
2-Butene	$C_4H_8$	$CH_3CH=CHCH_3$
1-Pentene	$C_5H_{10}$	$CH_3(CH_2)_2CH=CH_2$

# Physical properties

Carbon-carbon double bond changes the physical properties of alkenes.

Alkenes exist in all three phases, solid, liquids, and gases.

## 1) Physical state:

- Ethene, Propene, and Butene exist as colorless gases.
- Members of the 5 or more carbons such as Pentene, Hexene, and Heptene are liquid
- Members of the 15 carbons or more are solids .

## 2) Density:

- Alkenes are lighter than water.

### 3) Solubility:

- Insoluble in water.
- Alkenes are only soluble in nonpolar solvent like benzene, ether, chloroform.

### 4) Boiling point:

- Depends on more molecular mass (chain length.)

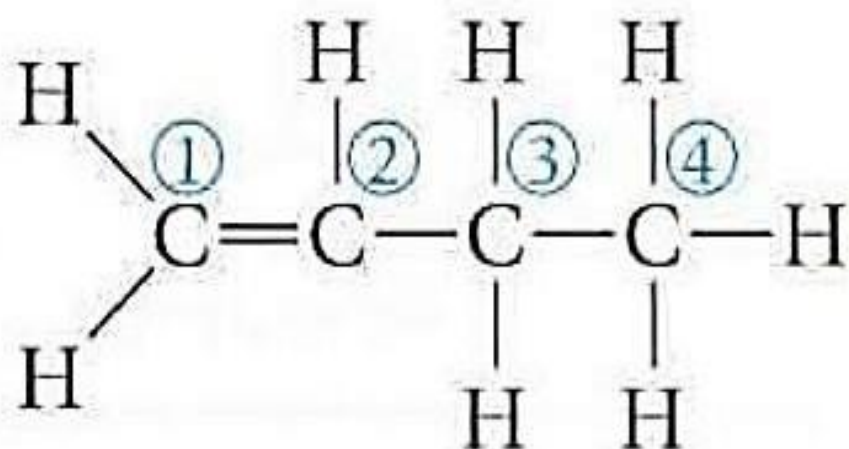
### 5) Melting point:

- Depends on the packaging of the molecules. Alkenes have similar melting points to that of alkanes.

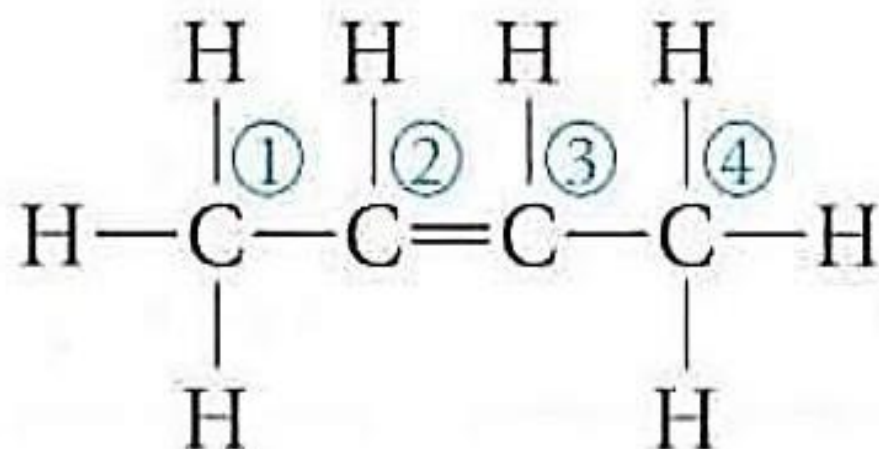
# Naming Alkenes

- A. (**ane**) suffix for the corresponding alkane is changed to (**ene**) for alkenes.
- B. A number preceding the name indicates the C atom on which the double bond starts.
- C. The carbons are numbered such that the double bond has the **lowest number**.

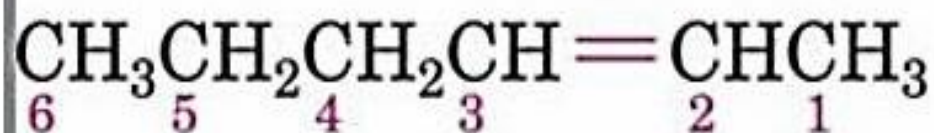
For example, 1-butene and 2-butene.



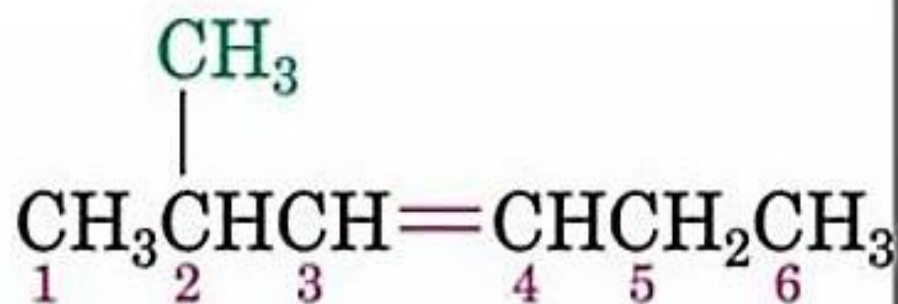
**1-Butene**



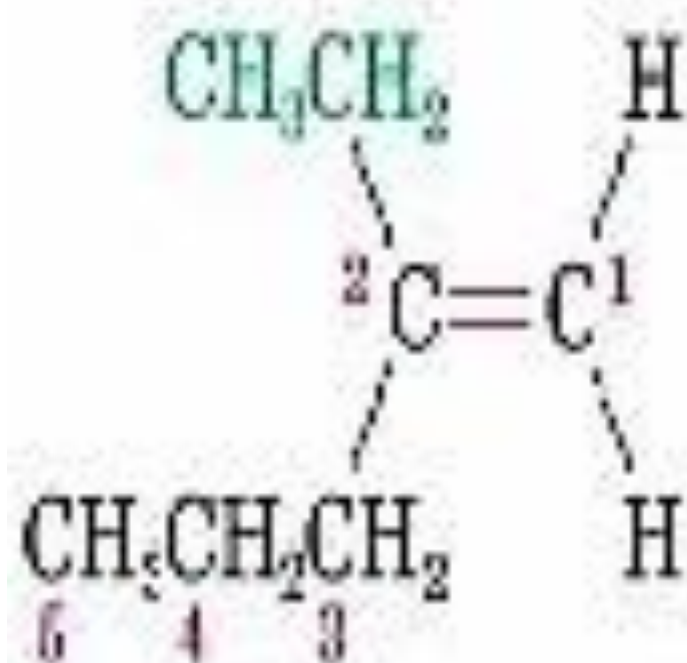
**2-Butene**



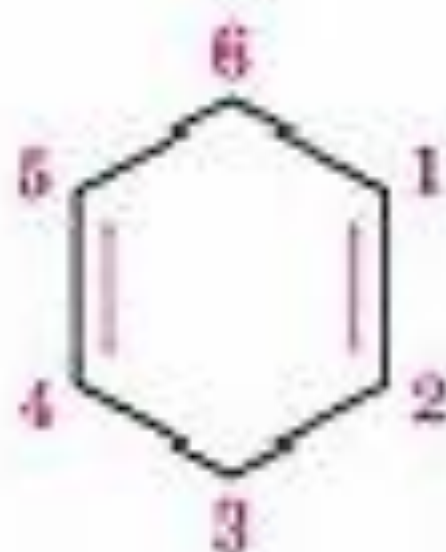
**2-Hexene**



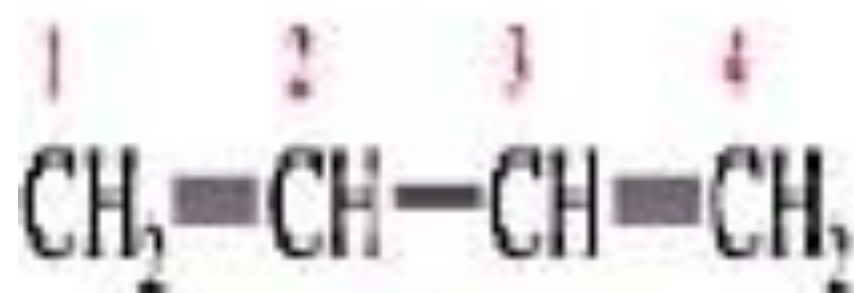
**2-Methyl-3-hexene**



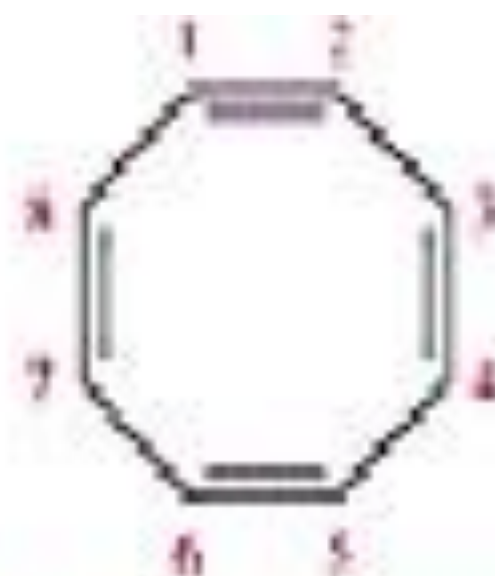
2-Ethyl-1-pentene



1,4-Cyclohexadiene



1,3-butadiene  
buta-1,3-diene



1,3,5,7-cyclooctatetraene  
cycloocta-1,3,5,7-tetraene



Thank  
you

