



Al-Mustaqbal University
College of Engineering
Biomedical Engineering Department



Subject Name: Medical Measurements Lab 1

4th Class, First Semester

Subject Code: [MU0114208]

Academic Year: 2025-2026

Lecturer: Assist lect. Hiba Diao Alrubaie

Eng: Ikram Falah Hadi

Email: *hiba.diaa.abdulameer@uomus.edu.iq*

Email: *ikram.falah.hadi@uomus.edu.iq*

Lecture No.: - 3 -

Lecture Title: [Simple Neuromuscular Reflexes]

Simple Neuromuscular Reflexes

The automatic response of a muscle to a stimulus is called a reflex. The patellar reflex can be initiated by tapping the patellar tendon below the knee with a reflex hammer. The tap on the tendon stretches the muscle, activating a stretch receptor that sends nerve impulses to the spinal cord. In the spinal cord, the incoming impulses activate motor neurons that travel back to the muscle and result in a contraction of the quadriceps muscle and extension of the leg. This reflex arc is primarily a spinal reflex, but is influenced by other pathways to and from the brain (Figure 1).

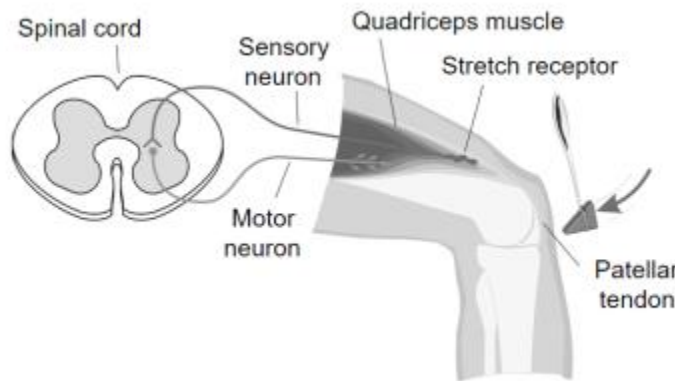


Figure 1

A reflex may be *reinforced* (a term used by neurologists) by slight voluntary contraction of muscles other than the one being tested. For example, voluntary activation of arm muscles by motor neurons in the central nervous system “spills over” to cause a slight activation of the leg muscles as well. This results in the enhancement of the patellar reflex. There are other examples of central nervous system influences on reflexes. Health care professionals use knowledge of these influences to aid in diagnosis of conditions such as acute stroke and herniated lumbar disk, where reflexes may be absent; and spinal cord injury and multiple sclerosis, which may result in exuberant reflexes.

In this experiment, you will use an EKG sensor to compare the speed of a voluntary muscle action versus a reflex muscle action as well as to measure the relative strength (amplitude) of the impulse generated by a stimulus with and without reinforcement. Using data generated by a force sensor mounted on a reflex hammer in conjunction with the EKG sensor, you will make a calculation of nerve impulse speed.

OBJECTIVES

- Graph the electrical activity of a muscle activated by a reflex arc through nerves to and from the spinal cord.
- Compare the relative speeds of voluntary and reflex muscle activation.
- Associate muscle activity with involuntary activation.
- Observe the effect of central nervous system influence on reflex amplitude.

Simple Neuromuscular Reflexes

- Calculate the approximate speed of a nerve impulse.
- Compare reflex response and electrical amplitude in different subjects.

MATERIALS

Chromebook, computer, **or** mobile device
Graphical Analysis 4 app
Go Direct EKG
Go Direct Force and Acceleration
Reflex Hammer Accessory Kit
electrode tabs
cloth tape measure
pen

PROCEDURE

Select one person from your lab group to be the subject. **Important:** Do not attempt this experiment if you have pain in or around the knee. Inform your instructor of any possible health problems that might be exacerbated if you participate in this exercise.

Part I Voluntary activation of the quadriceps muscle

1. Attach the Reflex Hammer Accessory Kit to the Go Direct Force and Acceleration (see Figure 2) according to the assembly instructions.
2. Connect and set up the sensors.
 - a. Launch Graphical Analysis.
 - b. Connect Go Direct EKG to your Chromebook, computer, or mobile device.
 - c. Click or tap Sensor Channels. Deselect the EKG channel and select the EMG Rectified channel.
 - d. Connect Go Direct Force and Acceleration to your Chromebook, computer, or mobile device. The default channel is correct for this experiment.
 - e. Click or tap Done.
 - f. Click or tap the Force meter and enable Reverse. Dismiss the menu; this will switch the coordinate system so a press on the force sensor hook will generate positive force values.
3. Set up the data-collection mode.
 - a. Click or tap Mode to open data-collection settings.
 - b. Change Rate to 100 samples/s and End Collection to 30 s.
 - c. Click or tap Done.
4. Have the subject sit comfortably in a chair that is high enough to allow his or her legs to dangle freely above the floor.

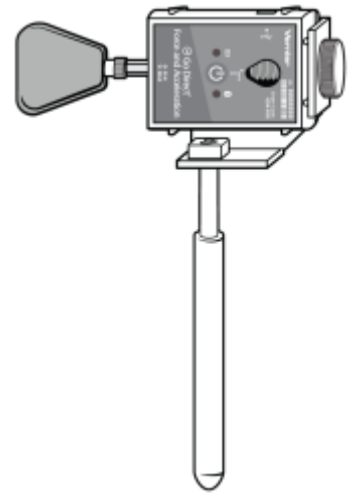


Figure 2

5. Attach two electrode tabs above one knee along the line of the quadriceps muscle between the knee and the hip (see Figure 3). The tabs should be 5 cm and 13 cm from the center of the patella. Place a third electrode tab on the lower leg.
6. Attach the red and green EKG leads to the electrode tabs above the knee with the red electrode closest to the knee. Attach the black lead (ground) to the electrode tab on the lower leg.

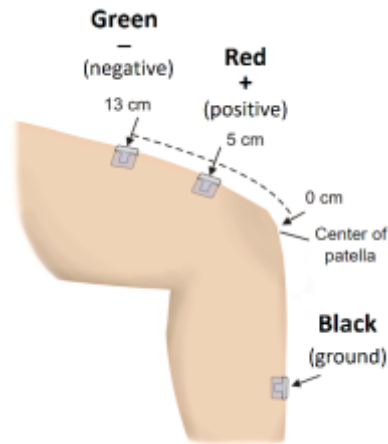


Figure 3

7. Click or tap Collect to start data collection. If the graph has a stable baseline as shown in Figure 4, click or tap Stop to stop data collection and continue to Step 8. If your graph has an unstable baseline, click or tap Stop and collect a new set of data by clicking or tapping Collect. Repeat data collection until you have obtained a stable baseline for 5 s. **Note:** The previous data set is automatically saved each time.

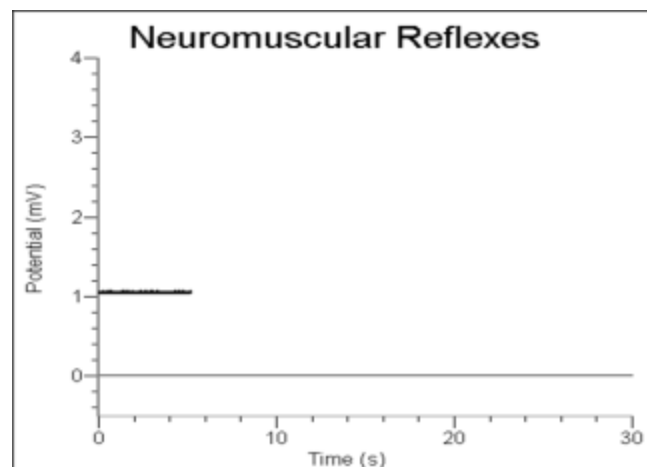


Figure 4

8. Collect voluntary muscle activation data. **Note:** Read the entire step before collecting data to become familiar with the procedure.
 - a. Have the subject close his or her eyes, or avert them from the screen.
 - b. Click or tap Collect to start data collection.
 - c. After recording 5 s of stable baseline, swing the reflex hammer briskly to contact the table or other surface that generates a sound.

Simple Neuromuscular Reflexes

- d. The subject should kick his or her leg out immediately upon hearing the sound.
 - e. Continue obtaining reflexes (repeat parts c and d of this step) so that you record 5 to 10 kicks during the data-collection period.
9. Determine the time elapsed between striking the table surface with the reflex hammer and the contraction of the quadriceps muscle.
- a. On the force graph, click or tap the first peak (which corresponds to the first kick). This peak indicates the time at which the table surface was struck. Record this time in Table 1.
 - b. On the EMG graph, click or tap the first high peak (Kick 1). This peak indicates the time at which the quadriceps muscle contracted. Record this time in Table 1.
 - c. Repeat this process of determining the time of the hammer strike and reflex for a total of five stimulus-kick pairs.
 - d. Calculate the change in time between the hammer strike and reflex for the five stimulus-kick pairs and then calculate the average change in time for all five pairs. Record the values in Table 1.

Part II Patellar reflex

10. Locate the subject's patellar tendon by feeling for the narrow band of tissue that connects the lower aspect of the patella to the tibia. Use a pen to mark a horizontal line in the center of the tendon (see Figure 5). The tendon can be identified by its softness compared with the bones above and below.

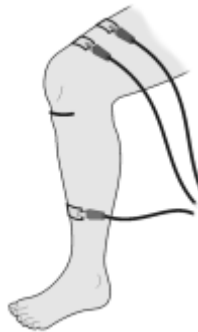


Figure 5

11. Click or tap Collect to start data collection. If your graph has a stable baseline as shown in Figure 4, click or tap Stop and continue to Step 12. If your graph has an unstable baseline, click or tap Stop and repeat data collection until you have obtained a stable baseline for 5 s.
12. Collect patellar reflex data. **Note:** Read the entire step before collecting data to familiarize yourself with the procedure.
- a. Have the subject close his or her eyes or avert them from the screen.
 - b. Click or tap Collect to start data collection.
 - c. After recording 5 s of stable baseline, swing the reflex hammer briskly to contact the mark on the subject's tendon. If this does not result in a visible reflex, aim toward other areas of the tendon until the reflex is obtained.

- d. Continue obtaining reflexes so that you record 5 to 10 reflexes during the collection period. If necessary, repeat this step until you have a data set with 5–10 reflexes.
13. Determine the time elapsed between striking the patellar tendon with the reflex hammer and the contraction of the quadriceps muscle.
 - a. On the force graph, click or tap the first peak (which corresponds to the first kick). This peak indicates the time at which the tendon was struck. Record this time in Table 2.
 - b. On the EMG graph, click or tap the first high peak (Kick 1). This peak indicates the time at which the quadriceps muscle contracted. Record this time in Table 2.
 - c. Repeat this process of determining the time of the hammer strike and reflex for a total of five stimulus-kick pairs.
 - d. Calculate the change in time between the hammer strike and reflex for the five stimulus-kick pairs and then calculate the average change in time for all five pairs. Record the values in Table 2.


Part III Reflex reinforcement

14. With the subject sitting comfortably in a chair, start data collection. If your graph has a stable baseline, click or tap Stop and continue to Step 15. If your graph has an unstable baseline, click or tap Stop and repeat data collection until you have obtained a stable baseline for 5 s.
15. Collect patellar reflex data without and with reinforcement. **Note:** Read the entire step before collecting data to familiarize yourself with the procedure.
 - a. Have the subject close his or her eyes or avert them from the screen.
 - b. Click or tap Collect to start data collection.
 - c. After recording a stable baseline for 5 s, swing the reflex hammer briskly to contact the mark on the subject's tendon. If this does not result in a visible reflex, aim toward other areas of the tendon until the reflex is obtained.
 - d. After 5 or 6 successful reflexes have been obtained, have the subject *reinforce* the reflex by hooking together his/her flexed fingers and pulling apart at chest level, with elbows extending outward (see Figure 6).
 - e. Continue obtaining reflexes until data collection is completed at 30 s. A total of 10–15 reflexes should appear on the graph.



Figure 6

Simple Neuromuscular Reflexes

16. Determine the minimum, maximum, and Δy for the depolarization events.
 - a. Select the first area of increased amplitude (depolarization) on the EMG graph (see Figure 7).
 - b. Click or tap Graph Tools, , on the EMG graph and choose View Statistics.
 - c. Record the minimum and maximum for this depolarization in Table 3, rounding to the nearest 0.01 mV.
 - d. Determine and record the Δy value (amplitude) as the ΔmV .

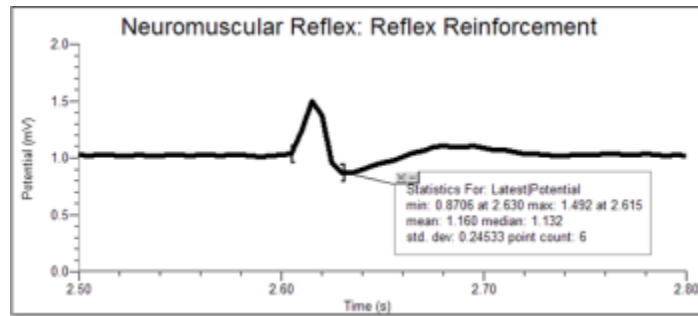


Figure 7

17. Repeat this process for each of five *unreinforced* and five *reinforced* depolarization events, using the EMG graph to identify each primary reflex. Ignore rebound responses. Record the appropriate values in Table 3.
18. Determine the average amplitude of the reinforced and unreinforced depolarization events examined. Record these values in Table 3.

DATA

Table 1						
	Kick 1	Kick 2	Kick 3	Kick 4	Kick 5	Average
Time of muscle contraction (s)						
Time of stimulus (s)						
Δt (s)						

Table 2						
	Reflex 1	Reflex 2	Reflex 3	Reflex 4	Reflex 5	Average
Time of muscle contraction (s)						
Time of stimulus (s)						
Δt (s)						

Table 3						
Reflex response	Reflex without reinforcement			Reflex with reinforcement		
	Max (mV)	Min (mV)	ΔmV	Max (mV)	Min (mV)	ΔmV
1						
2						
3						
4						
5						
Average values						

DATA ANALYSIS

1. Compare the reaction times between voluntary and involuntary activation of the quadriceps muscle. What might account for the observed differences in reaction times?
2. Using data from Table 2, calculate speed at which a stimulus traveled from the quadriceps muscle to the spinal cord and back to the quadriceps muscle (a complete reflex arc). To do this, you must estimate the distance traveled. Using a cloth tape measure, measure the distance in centimeters (cm) from the mark on the patellar tendon to the spinal cord at waist level (straight across from the anterior-superior iliac spine—see Figure 8). Multiply the distance by two to obtain the approximate total distance traveled in the reflex arc. Once this value has been obtained, divide by the average Δt from Table 2 and divide by 100 to obtain the speed, in m/s, at which the stimulus traveled.

Simple Neuromuscular Reflexes

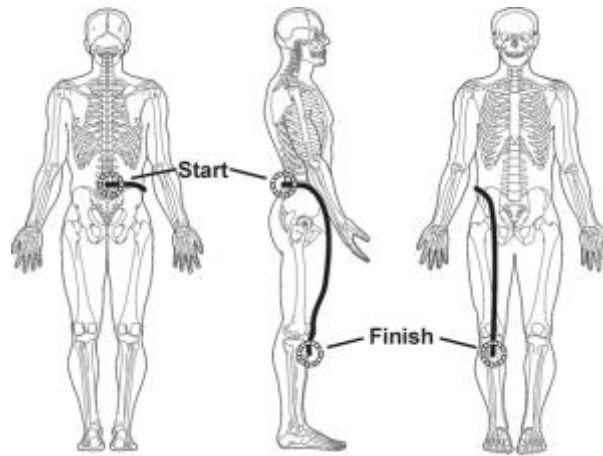


Figure 8

3. Nerve impulses have been found to travel as fast as 100 m/s. What could account for the difference between your answer to Question 2 and this value obtained by researchers?
4. Assume the speed of a nerve impulse is 100 m/s. How does this compare to the speed of electricity in a copper wire (approximately 3.00×10^8 m/s)?
5. Compare the data you obtained in this experiment with other members of your group/class. Can individual differences be attributed to any physical differences (e.g., body shape/size, muscle mass, physical fitness level)?

EXTENSIONS

1. Explore the Achilles tendon and brachioradialis reflexes.
2. Perform the experiment with the subject watching the reflex hammer as it hits the patellar tendon. Compare this data to data gathered while the subject is focusing on an object elsewhere in the room.